

HARI VIDYA BHAWAN
CLASS- Nursery
SUBJECT – MATHEMATICS

Date: 30-12-2020

General Instructions of worksheet::

1..please note from now onwards all worksheet should be completed in notebook Or coursebook Or application book of respective subjects as according to worksheet.

2..these worksheet will be considered as your evaluation marks will be given on completion else you will have to appear for pen paper test once the school reopens.

3...Read every topic which will be given in worksheet of the chapter from your course book.

4..All the students must purchase course book as it will enable you to understand the chapter.

5..watch the video of related topic from your active app.











6...All queries regarding worksheet shall be resolved from 8 :00 am to 3:00pm.

Q1) Write number name of 1 and 2 in your note book.

1-One	2-Two

Q2) Do the addition in your notebook.

Count the circles. Write the numbers. Find the sum.

	+		_____ + _____ = _____
	+		_____ + _____ = _____
	+		_____ + _____ = _____
	+		_____ + _____ = _____
	+		_____ + _____ = _____

Q3. Write counting 1 to 30 in your notebook.

HARI VIDYA BHAWAN
CLASS- KG
SUBJECT – MATHEMATICS

Date: 30-12-2020

Instructions of worksheet::

- **1..please note from now onwards all worksheet should be completed in notebook Or coursebook Or application book of respective subjects according to worksheet.**
- **2..these worksheet will be considered as your evaluation marks will be given on completion else you will have to appear for pen paper test once the school reopens.**
- **3...Read every topic which will be given in worksheet of the chapter from your course book.**
- **4..All the students must purchase course book as it will enable you to understand the chapter.**
- **5..watch the video of related topic from your active app.**
- **6...All queries regarding worksheet shall be resolved from 8 :00 am to 3:00pm.**

Q1. Write number names from 11 to 20 in your note book.

Q2. Do the addition:-

Addition (1-10)

$$\begin{array}{r} 7 \text{ } \img alt="7 cherries" data-bbox="280 210 425 245"/> \\ + 1 \text{ } \img alt="1 cherry" data-bbox="280 255 310 290"/> \\ \hline \end{array}$$

$$\begin{array}{r} 5 \text{ } \img alt="5 cherries" data-bbox="570 210 675 245"/> \\ + 3 \text{ } \img alt="3 cherries" data-bbox="570 255 635 290"/> \\ \hline \end{array}$$

$$\begin{array}{r} 4 \text{ } \img alt="4 cherries" data-bbox="280 360 360 395"/> \\ + 4 \text{ } \img alt="4 cherries" data-bbox="280 405 360 440"/> \\ \hline \end{array}$$

$$\begin{array}{r} 2 \text{ } \img alt="2 cherries" data-bbox="570 360 610 395"/> \\ + 6 \text{ } \img alt="6 cherries" data-bbox="570 405 690 440"/> \\ \hline \end{array}$$

$$\begin{array}{r} 2 \text{ } \img alt="2 cherries" data-bbox="280 512 315 547"/> \\ + 7 \text{ } \img alt="7 cherries" data-bbox="280 557 425 592"/> \\ \hline \end{array}$$

$$\begin{array}{r} 5 \text{ } \img alt="5 cherries" data-bbox="570 512 675 547"/> \\ + 4 \text{ } \img alt="4 cherries" data-bbox="570 557 650 592"/> \\ \hline \end{array}$$

$$\begin{array}{r} 6 \text{ } \img alt="6 cherries" data-bbox="280 663 400 698"/> \\ + 3 \text{ } \img alt="3 cherries" data-bbox="280 708 345 743"/> \\ \hline \end{array}$$

$$\begin{array}{r} 4 \text{ } \img alt="4 cherries" data-bbox="570 663 650 698"/> \\ + 2 \text{ } \img alt="2 cherries" data-bbox="570 708 610 743"/> \\ \hline \end{array}$$

Q3. Do the subtraction:-

Subtraction (1-10) - Cross off and find result

$$\begin{array}{r} 6 \\ - 4 \\ \hline \end{array}$$


$$\begin{array}{r} 9 \\ - 2 \\ \hline \end{array}$$


$$\begin{array}{r} 8 \\ - 4 \\ \hline \end{array}$$


$$\begin{array}{r} 5 \\ - 2 \\ \hline \end{array}$$


$$\begin{array}{r} 8 \\ - 2 \\ \hline \end{array}$$


$$\begin{array}{r} 4 \\ - 1 \\ \hline \end{array}$$


$$\begin{array}{r} 9 \\ - 5 \\ \hline \end{array}$$


$$\begin{array}{r} 8 \\ - 5 \\ \hline \end{array}$$


HARI VIDYA BHAWAN

Subject – English (Worksheet – 2)

Class - V

Chapter – 11

Mohit learns about robot

Date : 30.12.2020

General Instructions :-

1. Please note from now onwards all worksheet should be completed in notebook of respective subjects.
2. These worksheet will be considered as your periodic test, marks will be given on completion else you will have to appear for pen paper test once the school reopens.
3. Read every topic which will be given in worksheet of the chapter from your course book.
4. All the students must purchase course book as it will enable you to understand the chapter.
5. Watch the video of chapter - 11 in next curriculum app.
6. All queries regarding worksheet shall be resolved from 8:00 am to 3:00pm.

Vocabulary Junction

Idioms

Q1. Tick right the correct meaning of the underlined idioms in these sentences.

- (a) Last evening, it rained cats and dogs. The road is full of puddles.
i) Rained little ii) Rained heavily
- (b) Mrs. Dutt has a heart of gold. She serves lunch to all the poor children who live in her neighbourhood.
i) Is kind ii) Is rich
- (c) If his model helicopter does not work, it is back to square one for Ram with his science project.
i) To start something again from the beginning
ii) To get into trouble
- (d) Raghu was in hot water because he was late for the test.
i) In trouble ii) Get hurt
- (e) Swati let the cat out of the bag and spoilt the surprise.
i) To let a cat run free ii) To reveal a secret
- (f) Our school won the quiz championship this year. This is yet another feather in our cap.
i) A great success ii) A prize won by someone

(g) Although Sheetal got cold feet, she managed to dance really well in the competition.

i) Got hurt ii) Felt nervous

(h) We are in the same boat because we both forgot our homework.

i) Have the same problem

ii) To travel together

(i) Time flies when I read storybooks, but it crawls when I study.

i) Time seems to pass quickly

ii) Time seems to pass slowly

(j) Supriya had butterflies in her stomach, on her first day at the new school.

i) Felt hungry ii) Felt nervous

Q2. Choose the correct idiom from the box to complete the sentence.

- (a) Arun had butterflies in his stomach before the competition.
- (b) Paul won the swimming competition. It was yet another feather in his cap.
- (c) Time flies when I spend my vacations with my grandparents.
- (d) Ravi and Anna are in hot water. They broke their neighbour's window while playing cricket.
- (e) Ravi got cold feet when the teacher asked him to recite a poem in front of the class.
- (f) Last evening, it was raining cats and dogs. So, today there is no school!
- (g) My sister and I are in the same boat. We forgot our lunch bags.

Q3. Now let us look at some idioms related to science and technology.

Fill in the blanks with the idiom from the table.

- (a) My friend told me that this technology is light years ahead of the others available in the market.
- (b) Shobha and Nicky's ideas matched perfectly. They are on the same wavelength.
- (c) The boss wanted Sunil to fire on all cylinders as he was really lagging.
- (d) When I did not submit my homework on time, our teacher blew a fuse.
- (e) The red team won the competition because they worked together like a well-oiled machine.
- (f) It's weird that a majority of the people did not understand the simple instructions. It's not rocket science.

Note :

- Do Phonic Junction in your homework
- Read Grammar Station