

हरि विद्या भवन

वर्कशीट - 4

विषय - हिंदी

कक्षा - नर्सरी

पाठ - 1 (स्वर)

तिथि - 30 अप्रैल 21 / दिन - शुक्रवार

निर्देश: -

• कृपया अब से ध्यान दें कि संबंधित विषय की notebook में सभी वर्कशीट पूरी होनी चाहिए।

• ये वर्कशीट आपके आवधिक परीक्षण के रूप में मानी जाएगी, मार्क पूरा होने पर दिया जाएगा और आपको पेन पेपर टेस्ट के लिए उपस्थित होना होगा जो स्कूल में फिर से खुलता है।

• अपने पाठ्यक्रम की पुस्तक से अध्याय के कार्यपत्रक में दिए गए प्रत्येक विषय को पढ़ें।

• सभी छात्रों को पाठ्यक्रम की किताबें खरीदनी चाहिए क्योंकि यह आपको अध्याय को समझने में सक्षम करेगा।

• कार्यपत्रक से संबंधित सभी प्रश्नों को सुबह 8:00 बजे से दोपहर 1:30 बजे तक हल किया जाएगा।

आओ मिलकर गाएँ



आओ लिखना सीखें



चित्र पहचानें
और रंग भरें।



बिंदुओं को मिलाएँ
और वर्ण में रंग भरें।



बिंदुओं को मिलाकर वर्ण बनाएँ।

अ अ अ अ अ

अ अ अ अ अ

अ अ अ अ अ

अभ्यासिका निर्देश :- छात्र को बिंदु मिलाते हुए वर्ण का उच्चारण करने के लिए प्रोत्साहित करें।

14

निर्देश - स्वर ' अ ' को अपनी हिंदी की किताब तथा कॉपी में करें।

हरि विद्या भवन

वर्कशीट - 4

विषय - हिंदी

कक्षा - K.G.

पाठ - 2 (व्यंजन)

तिथि - 30 अप्रैल 21 / दिन - शुक्रवार

निर्देश: -

• कृपया अब से ध्यान दें कि संबंधित विषय की notebook में सभी वर्कशीट पूरी होनी चाहिए।

• ये वर्कशीट आपके आवधिक परीक्षण के रूप में मानी जाएगी, मार्क पूरा होने पर दिया जाएगा और आपको पेन पेपर टेस्ट के लिए उपस्थित होना होगा जो स्कूल में फिर से खुलता है।

• अपने पाठ्यक्रम की पुस्तक से अध्याय के कार्यपत्रक में दिए गए प्रत्येक विषय को पढ़ें।

• सभी छात्रों को पाठ्यक्रम की किताबें खरीदनी चाहिए क्योंकि यह आपको अध्याय को समझने में सक्षम करेगा।

• कार्यपत्रक से संबंधित सभी प्रश्नों को सुबह 8:00 बजे से दोपहर 1:30 बजे तक हल किया जाएगा।

प्रश्न :- रिक्त स्थान भरौ।

1. अ ____ इ ____ उ

2. ____ ख ____ घ ____

3. ____ ऋ ____ ऐ ____

4. च ____ झ ____

5. ओ ____ अं ____

यह कार्य अपनी हिंदी की कॉपी में करें।

अभ्यास



आओ गीत गाएँ



HARI VIDYA BHAWAN

CLASS -I

SUBJECT – EVS

WORKSHEET – 8

CHAPTER – 3 HOME AND AROUND

Date – 30.04.21

Instructions:-

- * Please note from now onwards all worksheet should be completed in Notebook of respective subjects.**
- * These worksheet will be considered as your periodic test, marks will be given on computation else you will have to appear for pen paper test ones the school reopen.**
- * Read every topic which will be given in worksheet of the chapter from your course book.**
- * All students must purchase course book as it will enable you to understand the chapter.**
- * All queries regarding worksheet shall be resolved from 8:00 a.m. to 3:00 p.m.**

*** Watch the video of chapter 3 given in the Next Curriculum App.**

HOME AND AROUND

Q1. Match the following :

Bed.	Bathroom
Cups , spoons and vessels	Bedroom
Television and sofa	kitchen
Toothbrush and toothpaste	Living room

Q2. Name the things that a house protect us from.

Ans. Rain , Storm and Wild Animals.

Q3. Who are neighbours ?

Ans: The people who live near one's house are called neighbours.

HARI VIDYA BHAWAN

CLASS – 1

SUBJECT – MATHS

WORKSHEET -7

CHAPTER – 3 (ADDITION 0-9)

Date – 30 -04-21

Instructions:-

*** Please note from now onwards all worksheet should be completed in Notebook of respective subjects.**

*** These worksheet will be considered as your periodic test, marks will be given on computation else you will have to appear for pen paper test ones the school reopen.**

*** Read every topic which will be given in worksheet of the chapter from your course book.**

*** All students must purchase course book as it will enable you to understand the chapter.**

*** All queries regarding worksheet shall be resolved from 8:00 a.m. to 3:00 p.m.**

*** Watch the video of chapter – 3 given in the Next Curriculum App.**

ADDITION (0-9)

Q 1. Show the additions on number lines

(a) $1+5$

(b) $2+6$

(c) $3+5$

(d) $4+5$

(Try it yourself)

Q2 . Tiya has 4 storybooks . Her mother gives her 2 more .How many storybooks does she have now?

Ans: 4

+ 2

6

Now she have 6 books .

Q3. Add and write the answers :

(a) 3

$$\begin{array}{r} + 5 \\ \hline \end{array}$$

8

(b) 7

$$\begin{array}{r} + 2 \\ \hline \end{array}$$

9

(c) 6

$$\begin{array}{r} + 3 \\ \hline \end{array}$$

9

(d) 5

$$\begin{array}{r} + 4 \\ \hline \end{array}$$

9

HARI VIDYA BHAWAN

CLASS :-2nd

SUBJECT :-English

TOPIC :- Rama learns to read

WORKSHEET - 8

Date :-30th April 21 / Day :-Friday

Instructions :-

- Please note from now onwards all worksheet should be completed in notebook of respective subject.
- These worksheet will be considered as your periodic test, mark will be given on completion else you will have to appear for pen paper test ones the school reopens.
- Read every topic which will be given in worksheet of the chapter from your course book.
- All the students must purchase course books as it will enable you to understand the chapter.

All queries regarding worksheet shall be resolved from 8:00 am to 1:30

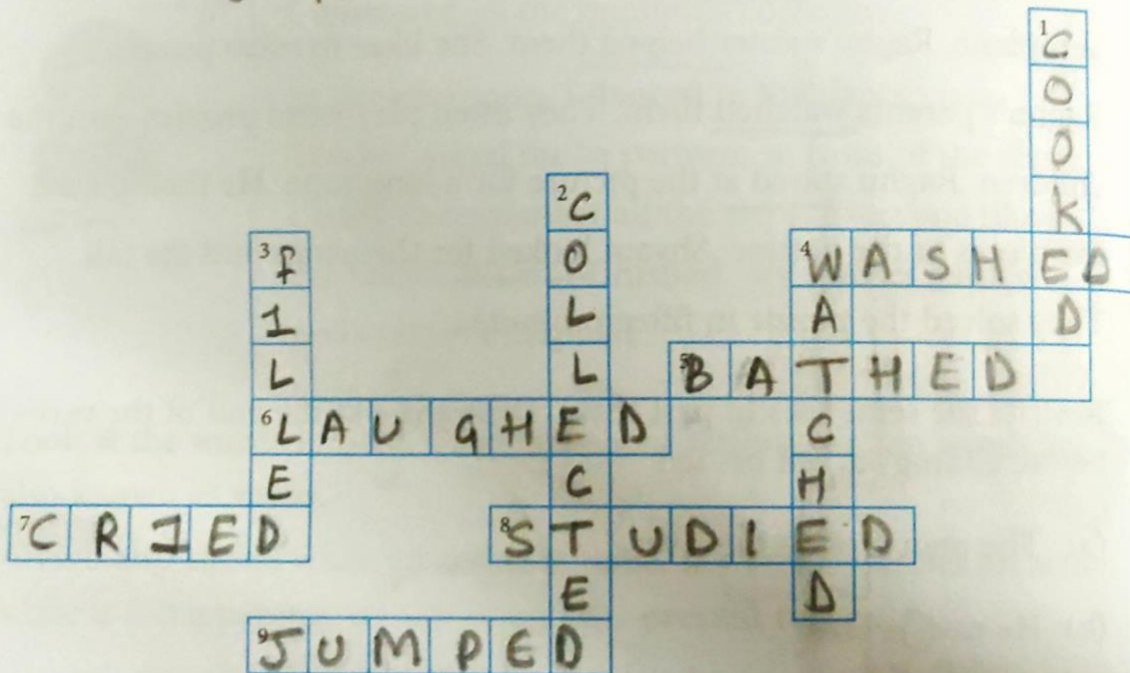
2. Rewrite the sentences in past tense. Drop the s at the end of the verbs before adding -d, -ed or -ied.

- (a) The man crosses the river.
crossed
- (b) He rows a boat.
rowed
- (c) The boat stops near the bank.
stopped
- (d) The man jumps out of the boat.
jumped
- (e) He wades through the water.
waded
- (f) He reaches the other side of the river.
reached
- (g) My grandfather jogs in the park.
jogged

3. Complete the crossword puzzle with help of the clues given.

Across

- 4 The woman washed the clothes in the river.
- 5 The elephant bathed in the river.
- 6 Tia laughed at the monkey's antics.
- 7 The baby cried loudly.
- 8 He studied hard for his test.
- 9 Shazia jumped over the puddle.



Down

- 1 Daddy Cooked dinner yesterday. It was delicious.
- 2 I Collected many shells from the sea beach.
- 3 The driver filled petrol in the car before starting the journey.
- 4 The police watched the robber's movement from the van.

4. The table shows what Jamaal did last week.

Mon	Tue	Wed	Thu	Fri	Sat	Sun
play football	study for test	submit school project	visit friend	dance in school drama	visit grand mother	watch a movie

5. Answer the questions in past tense.

(a) When did Jamaal visit his grandmother?

He visited his grandmother on Saturday

(b) When did Jamaal submit his school project?

He submitted his school project on Wednesday

(c) When did Jamaal play football?

He played football on Monday

(d) When did Jamaal watch a movie?

He watched a movie on Sunday

(e) When did Jamaal study for the test?

He studied for the test on Tuesday

(f) When did Jamaal dance in the school drama?

He danced in the school drama on Friday

HARI VIDYA BHAWAN

CLASS :-2nd

SUBJECT :-Maths

TOPIC :--ADDITION

WORKSHEET - 8

Date :- 30th April 21 / Day :-friday

Instructions :-

- **Please note from now onwards all worksheet should be completed in notebook of respective subject.**
- **These worksheet will be considered as your periodic test, mark will be given on completion else you will have to appear for pen paper test ones the school reopens.**
- **Read every topic which will be given in worksheet of the chapter from your course book.**
- **All the students must purchase course books as it will enable you to understand the chapter.**
- **All queries regarding worksheet shall be resolved from 8:00 am to 1:30**

Exercise 3.3

1. Solve these problems.

(a) $\boxed{3} + \boxed{4}$ is the same as $\boxed{4} + \boxed{3} = \boxed{7}$

(b) $\boxed{33} + \boxed{3}$ is the same as $\boxed{3} + \boxed{33} = \boxed{36}$

(c) $\boxed{10} + \boxed{10}$ is the same as $\boxed{10} + \boxed{10} = \boxed{20}$

(d) $\boxed{13} + \boxed{6}$ is the same as $\boxed{6} + \boxed{13} = \boxed{19}$

(e) $\boxed{25} + \boxed{1}$ is the same as $\boxed{1} + \boxed{25} = \boxed{26}$

(f) $\boxed{0} + \boxed{17}$ is the same as $\boxed{17} + \boxed{0} = \boxed{17}$

Exercise 3.4

1. Add the numbers. Show your work in the space provided.

(a) $14 + 34 + 10 =$

58

$$\begin{array}{r} 14 \\ 34 \\ +10 \\ \hline 58 \end{array}$$

(b) $31 + 37 + 25 =$

93

$$\begin{array}{r} \textcircled{1} \\ 31 \\ 37 \\ +25 \\ \hline 93 \end{array}$$

(c) $25 + 26 + 33 =$

84

$$\begin{array}{r} \textcircled{1} \\ 25 \\ 26 \\ +33 \\ \hline 84 \end{array}$$

(d) $12 + 41 + 29 =$

82

$$\begin{array}{r} \textcircled{1} \\ 12 \\ 41 \\ +29 \\ \hline 82 \end{array}$$

2. Add the numbers. Show your work in the space provided.

(a) $52 + 15 + 17 =$ 84

$$\begin{array}{r} \textcircled{1} \\ 52 \\ 15 \\ +17 \\ \hline 84 \end{array}$$

(b) $17 + 20 + 47 =$ 84

$$\begin{array}{r} \textcircled{1} \\ 17 \\ 20 \\ +47 \\ \hline 84 \end{array}$$

(c) $65 + 14 + 23 =$ 102

$$\begin{array}{r} \textcircled{1} \\ 65 \\ 14 \\ +23 \\ \hline 102 \end{array}$$

(d) $15 + 24 + 57 =$ 96

$$\begin{array}{r} \textcircled{1} \\ 15 \\ 24 \\ +57 \\ \hline 96 \end{array}$$

Next curriculum app.

HARI VIDYA BHAWAN

CLASS – 3

SUBJECT – General Knowledge

WORKSHEET – 4

Unit – 3 Europe

CHAPTER – 9 FAMOUS PEOPLE OF EUROPE

- **Do this work in your Notebook.**

Date – 30/04/2021

Instructions: -

* Please note from now onwards all worksheet should be completed in Notebook of respective subjects.

* These worksheets will be considered as your periodic test, marks will be given on computation else you will have to appear for pen paper test ones the school reopen.

* Read every topic which will be given in worksheet of the chapter from your course book.

* All students must purchase course book as it will enable you to understand the chapter.

* All queries regarding worksheet shall be resolved from 8:00 a.m. to 1:30 p.m.

* Page No – 16,17

9. Famous People of Europe

Tjena, everyone! I am Fredrick and I am from Sweden. Do you know that Alexander the Great was one of the earliest leaders in European History? Let's know more about him.



Alexander the Great was the king of the ancient Greek kingdom of Macedonia from 336 to 323 BC. He is regarded as history's greatest conquerer who established the largest empire in ancient Europe.

Name these famous personalities from Europe who are famous in their own fields. Use the Help Box as your guide.



1. An English naturalist who came up with the theory of evolution.

Charles Darwin

2. He was an Italian sculptor, painter, architect and poet.

Michelangelo



3. A Spanish painter who is considered one of the most famous artists in the world.



Pablo Picasso



4. A French inventor who invented the Braille system.

Louis Braille

5. An Italian astronomer and physicist who is considered as the father of modern physics.



Galileo Galilei



6. A British novelist and screenwriter who is famous for the Harry Potter series of books.

J.K. Rowling

Help Box



- | | | |
|-------------------|------------------|--------------------|
| a. J. K. Rowling | b. Louis Braille | c. Galileo Galilei |
| d. Charles Darwin | e. Pablo Picasso | f. Michelangelo |

HARI VIDYA BHAWAN
CHAPTER – 2 (Numbers)

MATHEMATICS (Answer sheet – 8)
Class – 3rd

Date: 30-04-2021

Instructions:

- Please note from now onwards all worksheet should be completed in notebook of respective subjects.
- These worksheets will be considered as your periodic test, marks will be given on completion else you will have to appear for pen paper test once the school reopens.
- Read every topic which will be given in worksheet of the chapter from your course book.
- All the students must purchase course book as it will enable you to understand the chapter.
- Watch the video of Chapter – 2 in the next curriculum app.
- All queries regarding worksheet shall be resolved from 8:00am to 3:00pm.

Q1. Find out the smallest and largest number in each pair:

Number	Smallest	Largest
(a) 2,034 and 3,173	2,034	3,173
(b) 4,123 and 490	490	4,123
(c) 4,336 and 4,926	4,336	4,926

Q2. Compare the numbers $<$, $>$ or $=$.

- (a) $3,175 \geq 2,167$
- (b) $5,551 \geq 5,515$
- (c) $3,833 \geq 1,834$
- (d) $300 + 10 + 1 \leq 3,000 + 10 + 1$
- (e) $4,000 + 5 \equiv 4,005$

Q3. Arrange the numbers in descending order:

(a)	<u>3,238</u>	<u>3,523</u>	<u>3,101</u>	<u>3,555</u>	<u>3,333</u>
Descending order :	3,555	3,523	3,333	3,238	3,101

(b)	<u>7,678</u>	<u>7,687</u>	<u>7,768</u>	<u>7,786</u>	<u>7,867</u>
Descending order :	7,867	7,786	7,768	7,687	7,678

(c)	<u>8,730</u>	<u>8,703</u>	<u>8,370</u>	<u>8,307</u>	<u>8,708</u>
Descending order :	8,730	8,708	8,703	8,370	8,307

Q4. Form six 4-digit numbers by the given digits 3, 2, 6 and 5. Arrange them in Ascending order.

Answer: **Six 4-digit numbers:** (i) 3,265 (ii) 3,625 (iii) 3,526 (iv) 3,256 (v) 3,652 (vi) 3,562

Ascending order: 3,256 3,265 3,526 3,562 3,625 3,652.

Q5. Write the smallest 4-digit number that can be formed using 3,5,4 and 0.

Answer: **Smallest 4-digit number: 3,045.**

Q6. Write the largest number that can be formed using the digits 8, 2, 0 and 5, with 8 in the hundreds place.

Answer : **Largest Number: 5,820.**

Q7. Write any four 4-digit numbers that can be formed using 8, 9, 5 and 1, with 1 in the tens place.

Answer:

- I. **8,915**
- II. **9,815**
- III. **5,918**
- IV. **5,819**

Hari Vidya Bhawan

CLASS-4

Sub EVS

Chapter -03 (FIELD TO KITCHEN)

Date – 30/04/21

Work sheet-7

Instructions:-

* Please note from now onwards all worksheet should be completed in Notebook of respective subjects.

* These worksheet will be considered as your periodic test, marks will be given on computation else you will

have to appear for pen paper test ones the school reopen.

* Read every topic which will be given in worksheet of the chapter from your course book.

All students must purchase course book as it will enable you to understand the chapter.

All queries regarding worksheet shall be resolved from 8

a.m. to 3pm.

Watch the video of ch-3 from next curriculum app.

Page no- 23

FIELDS TO KITCHEN

Dear Children,

Agriculture is the main occupation of a large number of people in our country.

A majority of the people in India directly or indirectly depend on agriculture for their livelihood. We get food grains, vegetables and fruits from the fields.

Highlights

- Meaning of agriculture
- Types of agriculture
- Types of crops
- Journey of food



Jump Start

1. Complete the table.

Name of the food item	Source of the food item (Plant/Animal)	Energy giving/Body building/Protective food	Methods used for cooking
Rice	Plant	Energy giving	Steaming/Boiling
Milk	Animal	Body building	Boiling
Egg	Animal	Body building	Boiling/Frying
Wheat	Plant	Energy giving	Roasting/Baking

2. Name any three utensils used for cooking.

Frying pan, Pressure cooker and wok.



Page no -27

Q.1 Write any two differences between ploughing by a tractor and oxen.

Ans. Ploughing with a tractor is a modern of farming which saves time and energy whereas ploughing with the help of oxen takes more time . Working with machines is always faster than working with the help of animals.

Q.2 Why do farmers use insecticides and pesticides ?
Write one disadvantage of using insecticides and pesticides.

Ans. Farmers use insecticides and pesticides on crops to kill harmful insects and pests. It gets absorbed into the soil and pollutes it.

Q.3

disadvantage of using insecticides and pesticides.

Write T for true or F for false.

- (a) Winnowing takes place before harvesting. F
- (b) A plough is usually made of iron or wood. T
- (c) Pesticides and insecticides are sprayed on crops for protecting them from heat. F
- (d) Harvested crops are stored in warehouses. T

Types of Agriculture

HARI VIDYA BHAWAN

Subject – G.K (Worksheet – 4)

Class - IV

Unit - 3

Europe

Date : 30/04/2021

General Instructions :

- Please note from now onwards all worksheet should be completed in notebook of respective subjects.
- Do this work in your Gk book.
- These worksheets will be considered as your periodic test, marks will be given on completion else you will have to appear for pen paper test once the school reopens.
- Read every topic which will be given in worksheet of the chapter from your course book.
- All the students must purchase course book as it will enable you to understand the chapter.
- All queries regarding worksheet shall be resolved from 8:00am to 3:00pm



11. Books for Me

Do you like to read storybooks? Which is the last storybook you read?



Here are children's books from the western world. Read the clues and write the names of the books.

1. Hansel and Gretel is a German fairy tale recorded by Brothers Grimm and published in 1812.
2. Charlie and the Chocolate Factory is by British author Roald Dahl. The story features the adventures of young Charlie Bucket inside the chocolate factory of Willy Wonka.
3. Black Beauty is an 1877 novel by English author Anna Sewell. It is the autobiography of a horse.
4. The Adventures of ^{Tintin} is a series of 24 comic albums created by Belgian cartoonist Georges Remi, who wrote under the pen name Hergé.
5. The Ugly Duckling is a fairy tale by Danish author Hans Christian Andersen. The story tells of a homely little bird born in a barnyard that turns into a beautiful swan.
6. Alan Alexander Milne was an English author, best known for his books about the teddy bear Winnie-the-Pooh and for various poems.



Do You Know?



Dr. Seuss' first book was rejected by over 20 publishers. His books have now sold over 500 million copies worldwide.

12. Countries and Capitals

The top-rated capitals in Europe are Vienna, Copenhagen, Stockholm and Berlin. Do you know their countries?



Choose your answer from the help box and name the capitals of countries of Europe as you move from start to finish. Play with a friend using heads or tails of a coin.

START

1. Sweden  <u>Stockholm</u>	2. Switzerland  <u>Bern</u>	3. Turkey  <u>Ankara</u>	4. Ukraine  <u>Kiev</u>	5. United Kingdom  <u>London</u>
10. Spain  <u>Madrid</u> Rome	9. Russia  <u>Moscow</u> Amsterdam	8. Portugal  <u>Lisbon</u>	7. Netherlands  <u>Amsterdam</u>	6. Italy  <u>Rome</u>
11. Belgium  <u>Brussels</u>	12. France  <u>Paris</u>	13. Germany  <u>Berlin</u>	14. Greece  <u>Athens</u>	15. Ireland  <u>Dublin.</u>

FINISH

Help Box



- | | | | | |
|--------------|-----------|-----------|-----------|-----------|
| a. Brussels | b. Paris | c. Athens | d. Lisbon | e. Madrid |
| f. Amsterdam | g. Rome | h. Moscow | i. Dublin | j. Berlin |
| k. Stockholm | l. Ankara | m. Bern | n. Kiev | o. London |

13. Famous Monuments

Europe is home to many famous monuments. Friends, let us read about them.



Read the clues and write the names of the magical monuments of Europe.



The icon for Paris, France, this iron tower is located on the Champ de Mars in Paris, named after the engineer Gustave Eiffel who designed it in 1889.

Eiffel Tower

An elliptical amphitheater in the center of the city of Rome, Italy, it was built of concrete and stone. It was the largest amphitheater of the Roman Empire.

The Colosseum




Also called Elizabeth Tower, it is the great bell of the clock at the Palace of Westminster, London.

Big Ben

FUN FACT



The Colosseum was built on a lake and took ten years to build.





Located in Moscow's Red Square, this is a Russian church and marks the geometric centre of Moscow in Russia.

Saint Basil's cathedral

A bell tower in Pisa, Italy known for its tilt to one side, it is 55 metres (183 ft).

Leaning Tower of Pisa




This symbol of London is a suspension bridge in London, over the River Thames.

Tower Bridge

It is an ancient citadel located on a high rock above the city of Athens in Greece.

Acropolis of Athens



Help Box



- a. Acropolis of Athens
- d. Leaning Tower of Pisa
- g. Saint Basil's Cathedral

- b. Big Ben
- e. Tower Bridge

- c. Eiffel Tower
- f. The Colosseum

Hari Vidya Bhawan

(Worksheet - 6)

Subject- English

Class- V

Chapter - 2

Little White dog

Date : 30.04.2021

General Instructions :

- Please note from now onwards all worksheet should be completed in notebook of respective subjects.
- These worksheets will be considered as your periodic test, marks will be given on completion else you will have to appear for pen paper test once the school reopens.
- Read every topic which will be given in worksheet of the chapter from your course book.
- All the students must purchase course book as it will enable you to understand the chapter.
- Watch the video of Chapter - 2, Grammar Junction in the next curriculum app.
- All queries regarding worksheet shall be resolved from 8:00am to 3:00pm

Grammar Junction

Yes/No questions

or

Closed questions

Q1. Use a dictionary to find the meaning of the words in italics in the questions. Write the meaning in the space given. Then answer the question with a Yes or No.

- (a) Is a *scar* a high-speed car? ()
- (b) Do you need *stamina* to run a race? ()
- (c) Is a bag of chips a *wholesome* meal? ()
- (d) Are tigers in India *endangered*? ()

- (e) Does *severe* rain affect crops? ()
- (f) Have you ever seen a *utensil*? ()
- (g) Are you being nice if you *defy* your parents? ()
- (h) Does one eat food from a *nameplate*? ()
- (i) Do we *mollify* babies when they cry? ()
- (j) Have you ever seen an *orchard*? ()
- (k) Is *nutmeg* a nut? ()
- (l) Are you nice if you are a *wilful* person?()

Q 2. Complete the questionnaire with helping verbs.

Example : Do you love books?

ARE you a BOOKWORM?

- (a) ____ you read books for more than two hours a day?
- (b) ____ you have a library at home that has more than twenty-five books?
- (c) ____ reading a part of your everyday activities?
- (d) ____ you participate in activities other than reading?
- (e) ____ you ever stayed back at home to finish reading a storybook or a comic instead of playing your favorite game with your friends?
- (f) ____ books excite you more than movies?
- (g) ____ you get upset if you are not able to get a book you want to read?
- (h) ____ you visit the library regularly?
- (i) ____ reading take up most of your free time every day?
- (j) ____ you like reading by yourself more than listening someone read the story?

Grammar Station

Q1. Read each dialogue and underline the error, if any.

- (a) Are you a doctor? Yes, I was
- (b) Is there any orange juice in the fridge? Yes there are.
- (c) Are you fond of stuffed toys? Yes, I am not .
- (d) Have you ever been to France? Yes, I was.
- (e) Do you like to read books? Yes, I should.
- (f) Will you attend the wedding? Yes,I will.

Q2. Fill in the blanks with the correct form of the verb.

- | | |
|--|------------------|
| (a) _____ you be eating so much junk food? | No, I shouldn't. |
| (b) _____ Sohail working today? | Yes, he is . |
| (c) _____ you like big cities? | No, I don't. |
| (d) _____ I borrow this DVD? | Yes, you can. |
| (e) _____ you visited the museum? | No, I haven't. |

Q3. Form questions for these responses.

- (a) Yes, I enjoyed the party.
- (b) No, I cannot swim.
- (c) No, I don't like jam?
- (d) Yes, I am allergic to dust.
- (e) I won't be going to the picnic tomorrow.

Activity

- Draw different Interjection words in any A4 sheet or in copy

Answers

Grammar Junction

- Ans 1.**
- | | |
|---|-------|
| (a) Scar means a mark, | (No) |
| (b) stamina means energy, | (Yes) |
| (c) Wholesome means nutritious meal,. | (No) |
| (d) endangered means rare, | (Yes) |
| (e) severe means heavy, | (Yes) |
| (f) utensil means a vessel, | (Yes) |
| (g) defy means disobey, | (No) |
| (h) nameplate means a sign which displays someone's name, | (No) |
| (i) Mollify means pacify, | (Yes) |
| (j) orchard means garden,. | (Yes) |
| (k) nutmeg means spice, | (No) |
| (l) Wilful means stubborn, | (No) |

Ans 2.

- (a) Do (b) Do (c) Is (d) Do
- (e) Have (f) Do (g) Do (h) Do
- (i) Does (j) Do

Answers
Grammar Station

Ans1.

- | | |
|--|-------------------------|
| (a) Are you a doctor? | Yes, I <u>was</u> |
| (b) Is there any orange juice in the fridge? | Yes, there <u>are</u> . |
| (c) Are you fond of stuffed toys? | Yes, I <u>am</u> not. |
| (d) Have you ever been to France? | Yes, I <u>was</u> . |
| (e) Do you like to read books? | Yes, I <u>should</u> . |
| (f) Will you attend the wedding? | Yes, I will. |

Ans2.

- (a) Should you be eating so much junk food?
- (b) Is Sohail working today?
- (c) Do you like big cities?
- (d) Can I borrow this DVD?
- (e) Have you visited the museum?

Ans3.

- (a) Did you enjoy the party?
- (b) Can you swim?
- (c) Do you like jam?
- (d) Are you allergic to dust?
- (e) Will you be going to the picnic tomorrow?

Note :

- Do this work in neat and clean handwriting.
- Do 15 minutes reading daily.

HARI VIDYA BHAWAN
CHAPTER – 2 (Four Operations together)

MATHEMATICS (Worksheet – 8)
Class – 5th

Date: 30-04-2021

Instructions:

- Please note from now onwards all worksheet should be completed in notebook of respective subjects.
- These worksheets will be considered as your periodic test, marks will be given on completion else you will have to appear for pen paper test once the school reopens.
- Read every topic which will be given in worksheet of the chapter from your course book.
- All the students must purchase course book as it will enable you to understand the chapter.
- Watch the video of Chapter – 2 in the next curriculum app.
- All queries regarding worksheet shall be resolved from 8:00am to 3:00pm.

Q1. Solve these.

(a) Riya and her sister bought shoes worth Rs. 1,569. They also bought dresses that were 16 times the cost of the shoes. They are left with Rs. 22,346 now. How much money did they initially have?

Solution: Cost of shoes = 1,569
Cost of dresses = $16 \times 1,569 = 25,104$
Money left = 22,346
Money they have before = $1,569 + 25,104 + 22,346 = \text{Rs.}49,019$

(b) A copper wire was 240m long. After 60m was cut off, it was double the length of a steel wire. Originally how much longer was the copper wire than the steel wire?

Solution: Length of copper wire = 240m
Length of steel wire = $240 - 60 = 180 \div 2 = 90\text{m}$
Copper wire longer than steel wire by = $240 - 90 = 150\text{m}$

- (c) Mrs. Kohli and Mr. Malhotra coincidentally share the same birth date, that is, 13th October 1988. Calculate the number of days they have spent on earth till 20th October 2012, considering that 1 year has only 365 days.

Solution: Number of years = $2012 - 1988 = 24$ years

Number of days = $20 - 13 = 7$ days

Total number of days = $24 \times 365 + 7 = 8,760 + 7 = 8,767$ days

Q2. Find the product for each of these problems.

(a) $5672 \times 56 = 317632$

(b) $2109 \times 90 = 189810$

(c) $1326 \times 26 = 34476$

(d) $7843 \times 43 = 337249$

(e) $2035 \times 200 = 407000$

(f) $7893 \times 102 = 805086$