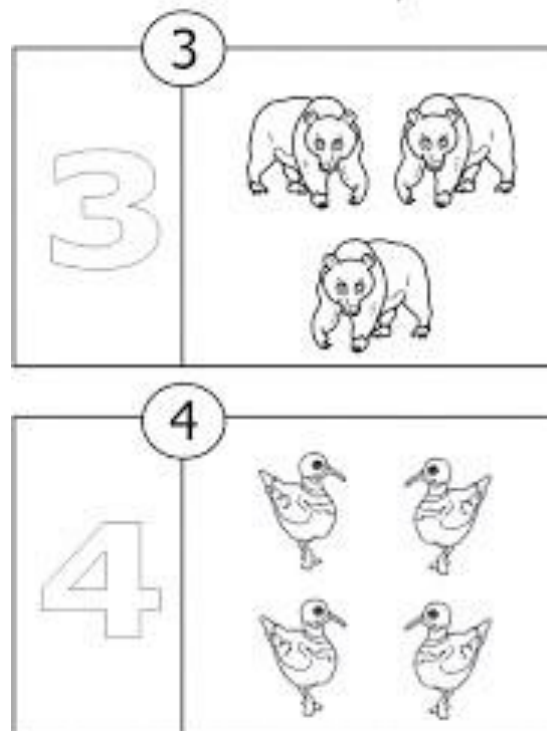


HARI VIDYA BHAWAN
WORKSHEET – 24(25.04.2020)
CLASS – NURSERY
SUBJECT – MATHS

*NOTE- This worksheet can be done in any rough notebook or any other notebook available at home

Q1. Write 1 page of number 3 & 4.



Q2. Draw one big circle & one small circle and colour them

HARI VIDYA BHAWAN
WORKSHEET -3 (25.04.2020)

CLASS – NURSERY

SUBJECT – S.K.

*NOTE- This worksheet can be done in any rough notebook or any other notebook available at home.

*This subject in nursery class is only for oral there will be no written paper of s.k.

HELLO! My Dear students today I want to Know that what are your favorite things that you do.....Let's Go

My Favourite Things to Do



I love cycling. What do you like to do?

Colour the circle near the pictures which show what you like to do.



HARI VIDYA BHAWAN

CLASS-KG

SUBJECT-MATHS WORKSHEET

DATE: 25/04/20

Q1) WRITE A PAGE OF FORWARD COUNTING 1 TO 20,

AND A BACKWARD COUNTING 10 TO 1 (IN NOTEBOOK).

Q2) SMALLEST TO BIGGEST.

Now you all are able to see in this page some pictures are small

Then going to big and again then going to biggest.

Unit-4
Seriation
Smallest to Biggest

Arrange the pictures from smallest to biggest by numbering them from 1 to 3.

Draw three balls in the following way:
smallest → biggest

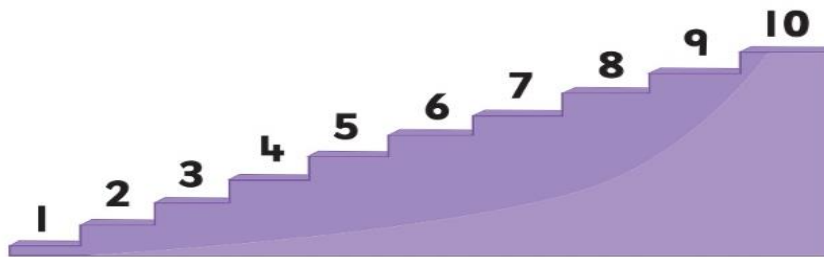
22

WHEN AN OBJECT INCREASE HIS SIZE, WE WILL CALL THEM

GOING TO SMALLEST TO BIGGEST IN SIZE.


FOR EG:- IN NUMBERS ALSO, SEE THE NEXT PAGE .

Small to Big








1 is the smallest number. It is on the lowest stair.
As you climb up the stairs, the numbers get bigger.

Fill missing numbers in the blanks to arrange the numbers from small to big.



Q4) COUNT THE OBJECTS AND WRITE THE NUMBERS:-

- 1)  = _____
- 2)  = _____
- 3)  = _____
- 4)  = _____
- 5)  = _____

(Preventive Measures for Corona Virus)

* Wash your Hands regularly for 20 seconds at least.

* Don't shake Hands  

* Do Namaste  

NOTE: WORKSHEETS ARE DONE IN COURSEBOOKS OR IN ROUGH OR IN FAIR NOTEBOOKS..... STAY SAFE AT HOME  

HARI VIDYA BHAWAN

CLASS- KG

SUBJECT – ENGLISH WORKSHEET

DATE: 25/04/20

Q1) DO A ORAL PRACTICE OF PHONIC SOUNDS (a to z). [from attached video]

Q2) MATCH THE CAPITAL LETTERS WITH SMALL LETTERS.

A	w	C	h
L	d	X	v
Q	z	M	o
F	a	H	x
S	i	O	r
D	q	B	c
J	f	V	g
W	s	G	b
Z	j	R	m

Q3) READ A LOUD AND LEARN THE RHYME: [Video of this poem is also. attached with the worksheet]

[I LOVE U MUMMY]

I LOVE YOU



*I LOVE U MUMMY,
I REALLY DO!
YOU'RE ALWAYS HAPPY,
AND FUNNY TOO.
WHEN IT IS SUNNY,
I THINK OF YOU,
I LOVE YOU MUMMY,
YOU LOVE ME TOO.....*

[NOTE:DEAR ALL STUDENTS AFTER LEARNING THIS POEM YOU HAVE TO MAKE A VIDEO ON IT AND SEND IN THE GROUP WITHOUT IT YOURS HW IS INCOMPLETE.]

HEY ! STUDENTS NOW WE WILL LEARN ABOUT RHYMING WORDS:

DO YOU KNOW! WHAT IS RHYMING WORDS?

A RHYME IS A REPETITION OF SIMILAR SOUNDS IN TWO OR MORE WORDS IS CALLED RHYMING WORDS. FOR EX: Fun/Run, Hit/Fit.

Q4) CIRCLE THE WORDS IN EACH ROW THAT HAVE THE SAME SHORT VOWEL RHYMING SOUND AS THE WORD IN THE BOX.

cat	sat	hat	dot	bat
lip	tip	cup	sip	rip
tub	rub	sub	fib	cub
pot	not	hot	rot	rat
bed	tin	red	led	fed

(Preventive Measures for Corona Virus)

* Wash your Hands🧼 regularly for 20 seconds at least.

* Don't shake Hands🤝❌

* Do Namaste🙏✅

NOTE: WORKSHEETS ARE DONE IN COURSEBOOKS OR IN ROUGH OR IN FAIR NOTEBOOKS..... STAY SAFE AT HOME 🙏😊

HARI VIDYA BHAWAN

WORKSHEET-5

CLASS-I

SUBJECT-MATHS

CH-2 (NUMBERS)

DATE-25-4-2020

NOTE:(PLEASE DO THIS WORK IN ANY NOTEBOOK)

Q-1. Write the number that comes after:-

i. 4 -----

ii. 2 -----

iii. 8 -----

iv. 0 -----

v. 3 -----

Q-2. Write the numbers that comes before:-

i. 3 -----

ii. 8 -----

iii. 2 -----

iv. 7 -----

v. 1 -----

Q-3. Write and learn number name- 15 to 20.

Q-4. Addition-

i. 7

+ 1

ii. 3

+ 2

iii. 4

+ 3

iv. 5

+ 2

Q-5. Write and learn backward counting 20 to 1.

Q-6. Write and learn table of 2.

HARI VIDYA BHAWAN
(Test paper -2)
Class-1st
Subject-computer
CH-1, Computer- A Magic Machine

Date: 25/4/2020

INSTRUCTION: You can do this work in any notebook.

Q1: Tick the correct picture shown below:

1. Your father wants to reach office quickly. He should go by:



Car



Walking

Q2: Your brother wants to go to the sixth floor of the mall quickly. He should use:






Stair



Escalators

Q3: tick the machines used in our home:

 <small>VectorStock</small>		 <small>twinkl.com</small>
---	---	--

HARI VIDYA BHAWAN

CLASS-1

[SUB: S.K.] / WORKSHEET – 2

DATE: 25-4-2020 / DAY: FRIDAY

NOTE: You can do this Work in any note book.

**PREVIOUS
KNOWLEDGE**

Q.- Write these Formal Greeting: -

FORMAL GREETING

**GOOD MORNING
(IN THE
MORNING)
[0:00 TO 12:00]**

**GOOD
AFTERNOON
(IN THE
AFTERNOON)
[12:00 TO 5:00]**

**GOOD EVENING
(IN THE
EVENING)
[AFTER 5:00]**

**GOOD NIGHT
(BEFORE GOING
TO SLEEP)**

CHAPTER-1 "I AM SPECIAL"

Q.- Fill in the blanks: -

- Emily is a baby **elephant** who lives in jungle.
- Emily was sad because she had no **friend**.
- Binny could not be friends with Emily as she could not **fly**.
- Finny was special because he could live and play in the **water**.
- Emily thought Torty was special because he had a **shell**.

HARI VIDYA BHAWAN
Worksheet-9(answer key)

CLASS-2

SUB-MATHS





CH-1 SHAPES,LINES AND SHADOWS

DATE:-25-04-2020

General Instructions:-

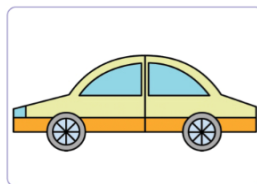
- (i) You can do the worksheet in any notebook .
- (ii) Before solving the worksheets please go through the video of related chapter.

1. Read the questions and select the appropriate answer.

- (a) A square has _____ sides. (4/3/2) 
- (b) The point where two sides meet is called a _____. 
(point/line/corner)
- (c) Every face of a cube is a _____. 
(square/rectangle/circle)
- (d) In a _____, one face is curved and one face is flat. (cube/sphere/cone)
- (e) What is the shape of this pencil? _____
(cone/cylinder/cuboid)
- (f) In a rectangle, two sides are _____ and two sides are _____. (long, short/straight, curved) 

2. How many of each do you see in the figure?

2.



- (a) Number of curved lines
- (b) Number of vertical lines
- (c) Number of horizontal lines
- (d) Number of slanting lines

7

8

6

6

Q.1 answer- a) 4 b) corner c) square d) cone
e) cylinder. f) long, short

PRACTICE TIME

1) **WRITE THE TABLE OF 4 and 5.**

HARI VIDYA BHAWAN
(Test Paper-2)
Class-2nd
Subject-computer
CH-1, Computer- Its types

Date: 25/4/2020

INSTRUCTION: You can do this work in any notebook.

Q1: Encircle the correct picture of the computer types given below.

laptop



Desktop



Tablet pc



smartphone



Q2: Answer the following questions:

1. What is a computer?

Ans

2. On which principle does a computer work?

Ans:

3. Name the different types of computer?

Ans:

HARI VIDYA BHAWAN
WORKSHEET NO-3 (With Answers)
CHAPTER-1 (BEING RESPECTFUL)
SUBJECT- VALUE-EDUCATION
CLASS-II

DATE:-25-04-2020

Instruction:- (i) You can do this worksheet in any old or new copy.

(ii) Read the chapter aloud before doing the worksheet

Q1) Fill in the blanks:-

- a) Michael behaved badly with his father.
- b) Jason made wooden bowl for his father.
- c) In a small town lived a carpenter named Michael.
- d) Michael's eyes were filled with tears.
- e) At night, Henry's hands would tremble due to cold.

Q2) Rearrange the letters and name them.

- a) Doow. - Wood
- b) Ingth. - Night
- c) Leef. - Feel
- d) Phel. - Help
- e) Dinf - Find

Basic Knowledge

Q3) Write the five important values for student life.

- **HONESTY**
- **RESPECT**
- **HARD WORK**
- **HELPFUL**
- **NEVER HURT ANYONE**

HARI VIDYA BHAWAN
CHAPTER – 2 (Numbers)

MATHEMATICS (Worksheet -5)
Class – 3rd

Date: 25-04-2020

Instructions:

- You can do this work in any notebook.
- Before start your worksheet watch the video of chapter 2 given in next curriculum app.
- Watch the video for understand more about comparing order,(greater than less than or ascending and descending order). <https://youtu.be/kISKH3uwSsY> and <https://youtu.be/Ji0tuVmezgl>.

Q1. Find out the smallest and largest number in each pair:

Number	Smallest	Largest
(a) 2,034 and 3,173		
(b) 4,123 and 490		
(c) 4,336 and 4,926		

Q2. Compare the numbers < , > or = .

- (a) 3,175 _____ 2,167
(b) 5,551 _____ 5,515
(c) 3,833 _____ 1,834
(d) $300 + 10 + 1$ _____ $3,000 + 10 + 1$
(e) $4,000 + 5$ _____ 4,005

Q3. Arrange the numbers in descending order:

(a)	3,238	3,523	3,101	3,555	3,333
(b)	7,678	7,687	7,768	7,786	7,867
(c)	8,730	8,703	8,370	8,307	8,708

Q4. Formed six numbers by the given digits 3, 2, 6 and 5. Arrange them in Ascending order.

Q5. Solve these.

(a) $3,456 + 567 =$

(b) $5,701 + 206 + 3056 =$

(c) $6,890 - 4,762 =$

(d) $9,003 - 823 =$

HARI VIDYA BHAWAN
(Test paper -2)
Class-3rd
Subject-computer
CH-1, Computer –Its working

Date: 25/4/2020

INSTRUCTION: You can do this work in any notebook.

Q1: Tick the correct answer:

- a. A computer is an electronic device which receives the Data from the user.
1. Information 2. Data 3. Result
- b. The meaningful and organized form of data is Information
1. Software 2. Information 3. Hardware
- c. After processing, the computer shows the result as an Output.
1. Input 2. Storage 3. Output
- d. The person who uses the computer and information generated by it is called User
1. User 2. Information 3. Input

Q2: Define the following:

1. Data

2. Information

3. User

HARI VIDYA BHAWAN

Subject -Gk (worksheet no-3)

Class-3

UNIT- 1 THE ASIATIC NATIONS INDIA

Date: 25-4-20

General Instructions :

- All the work should be done in copy.

Chapter-5 Famous Musicians

Now moving on from books, what about exploring some musical instruments?Have you heard about Pandit Ravi Shankar ?He is one of the best players of sitar, a string musical instrument that originated from India.

Q1.Here are the list of instruments players with the musical instruments they play:

PLAYERS.	INSTRUMENTS
a) Pandit Ravi Shankar.	Sitar
b) Hariprasad Chaurasia.	Flute
c) Pandit Shivkumar Sharma.	Santoor
d) Ustad Amjad Ali Khan.	Sarod
e) Zakir Hussain.	Tabla

UNIT -2 THE ASIATIC NATIONS OTHER COUNTRIES


Chapter-6 Foods of Asia

I am sure you all are familiar with dishes like sushii , dumpling ,chowmein ,thukpa etc.Although these dishes are available at Indian restaurants, they are not originally from India.Let's check the origins of some of these dishes.

Q1. Here are list of some dishes and their originated places:

	DISHES.	PLACES
a)	Kimchi.	Korea
b)	Sushii.	Japan
c)	Thukpa.	Tibet
d)	Chowmein.	China
e)	Kabuli pulao.	Afghanistan
f)	Nasi goreng.	Indonesia
g)	Kottu.	Srilanka

HARI VIDYA BHAWAN
CLASS-4
SUBJECT – MATHEMATICS
Ch-2 ADDITION AND SUBTRACTION (ex-2.1)
WORKSHEET No.3



Date: 25-04-2020

Instructions:

- You can do this work in any notebook.
- Before doing your worksheet watch the video given in your chapter in next curriculum app .

Q1) Solve these word problems.

a) On Saturday 90,167 people come to see the Taj Mahal while 1,05,413 people come on Sunday. In all, how many people visited the monument on two days?

b) Garima buys 4,500 marbles. Priyanka gives 1,275 marbles to Garima. How many marbles does Garima have now?

c) The National Library of India has 11,086 fiction books, the number of historical books is exactly half the number of fiction books and the number of poetry books is 14,289 more than the historical books. Find the total number of books.

d) In a city, there are 12,784 plants. The municipal corporation plants 15,125 more saplings in the first month and 24,360 saplings in the next two months. How many plants are there in the city now?

Q2) Estimate the sum and choose the correct option:-

a) $2,845 + 3,631 =$ _____ (7,500 , 7000)

b) $34,256 + 16,341 =$ _____ (50,000 , 40,000)

c) $98,121 + 43,28 =$ _____ (1,01,000 , 1,02,000)

d) $6,435 + 19,242 =$ _____ (25,000 , 26,000)

FUN TIME

#Make a picture or collage from waste materials.

STAY SAFE STAY HOME

HARI VIDYA BHAWAN
(Test paper- 2)
Class-4th
Subject-computer
CH-1, Computer –Its classification

Date: 25/4/2020

INSTRUCTION: You can do this work in any notebook.

Q1: Fill in the blanks:

1. In _____ Computers, all calculations are represented as '0' and '1'
2. Microcomputers are also called _____.
3. _____ Is a mobile device designed to be worn on the wrist.
4. _____ Is one of the popular models of game console.

Q2: Match the following:

- | | |
|------------------------|-----------------------------------|
| 1. Desktop | a. Game console |
| 2. Tablet pc | b. Developed by IBM |
| 3. E-Book | c. Is placed on a table or a desk |
| 4. Sony play station 4 | d. Electric book |
| 5. Mainframe computer | e. Has a touch screen |

HARI VIDYABHAWAN

Subject-Gk (Worksheet no-3)

Class-4

UNIT-2 THE ASIATIC NATIONS OTHER COUNTRIES

Chapter-5 Games we play

Date-25-4-20

General Instructions: You can do this work in any copy.

Hello again! Do you know that India won 6 gold medals in field hockey in the Olympic Games from 1928-1956. Field hockey is a very popular sport of India.

Q1. Complete the sentences with the names of national sports.

1. **Buzakshi**, the national game of Afghanistan is also known as kopar.
2. **Archery** was declared the national sport by the kingdom of Bhutan in 1971.
3. **Wrestling** is the national game of Iran.
4. On the basis of popularity **Table Tennis** is considered as the national game of China.
5. **Kabaddi** is the national game of Bangladesh.
6. Also called kick volleyball, **SepakTakraw** is the national sport of Malaysia.
7. **SumoWrestling** is considered as Japan's national sport.
8. **Badminton** is the national game of Indonesia.
9. The national game of Philippines is **Arnis**. It is one of the best martial arts for self-defence.
10. **Bandy** is the national game of Russia. It is a winter sport played on ice.

Chapter-6 Asia Atlas

Asia is the largest continent of the world. Let us know Asia's main regions.

Q1. Here are some matching list of main regions and their places.

- a) These are the "Celestial Mountains" in Mandarin. **TEIN SHAN**
- b) The plateau has two large deserts, the Dasht-e kavir and Dasht -e Lut. **IRANIAN PLATEAU**
- c) It is known as the "Roof of the World". **TIBETAN PLATEAU**
- d) These mountains separate India from rest of Asia. **HIMALAYAS**
- e) Located in southern Russia It is the deepest lake in the World. **LAKE BAIKAL**
- f) The desert is known as the Empty Quarter because it is inhospitable. **RUB'AL KHALI**
- g) It is the largest river in Asia. **YANGTZE**
- h) It is the largest bay in the World. Large rivers, including the Ganges and Brahmaputra, **BAY OF BENGAL**

empty into it.

HARI VIDYA BHAWAN
CHAPTER – 2 (Four Operations together)

MATHEMATICS (Worksheet -4)
Class – 5th

Date: 25-04-2020

Instructions:

- You can do this work in any notebook.
- Before start your worksheet watch the video of chapter 2 given in next curriculum app.

Q1. Solve these.

- (a) Riya and her sister bought shoes worth Rs. 1,569. They also bought dresses that were 16 times the cost of the shoes. They are left with Rs. 22,346 now. How much money did they initially have?
- (b) A copper wire was 240m long. After 60m was cut off, it was double the length of a steel wire. Originally how much longer was the copper wire than the steel wire?
- (c) Mrs. Kohli and Mr. Malhotra coincidentally share the same birth date, that is, 13th October 1988. Calculate the number of days they have spent on earth till 20th October 2012, considering that 1 year has only 365 days.

Q2. Read the statement and make a word problem (Question).

Eg;(a) A factory produces 1,267 meters of thread in a day.

Word problem: **How much thread does it produce in a day?**

- (b) Disha's monthly salary is Rs. 98,567. She spends Rs. 56,789 every month.
- (c) Reena buys 12 oranges for Rs. 240 from a shop.

Q3. Learn the table from 15 to 20.

HARI VIDYA BHAWAN
Test paper- 2
Class-5th
Subject-computer
CH-1, Computer –History & Generation

Date: 25/4/2020

INSTRUCTION: You can do this work in any notebook.

Q1:

Q3: Fill in the blanks:

1. Abacus was invented by _____
2. _____ Was invented by Blaise Pascal in 1642.
3. _____ Invented 'Difference Engine' and 'Analytical Engine'.
4. _____ And _____ are the example of first -generation computer.
5. The second- generation computers used Assembly language.
6. The transistor was replaced by _____ in the third -generation computer.
7. The _____-generation computer used Microprocessor
8. The goal of fifth generation is to develop the computer that can respond to _____.

Q2: Read the clues and name the machines.

1. Its numbers were marked on a set of rectangular rods.
Ans:
2. Its principle is still used today in water meter and speedometer.
Ans:
3. Vacuum tubes were replaced by it.
Ans:
4. It is based on Artificial Intelligence and still in development phase.
Ans:

HARI VIDYA BHAWAN

Subject -GK (Worksheet -3)

Class-5

UNIT -1THE ASIATIC NATIONS INDIA

Date: 25-4-20

General Instructions:

- You can do this work in any copy.

Chapter-5 Shoutout of Slogans

Slogans play a major role to motivate people and give a jumpstart to important movements.

Q1. Here are some famous slogans by famous Indian freedom fighters:

1. "INQUILAB ZINDABAD".

Bhagat Singh

2. "JAI HIND".

Subash Chandra Bose

3. "JAI JAWAN JAI KISAN".

Lal Bahadur Shastri

4. "VANDE MATARAM".

Bankim Chandra Chatterjee

5. "SWARAJ IS MY BIRTH RIGHT".

Bal Gangadhar Tilak

6. "SIMON GO BACK".

LALA LAJPAT RAI

Chapter -6 Kudos Kalam

We all know that Dr.A.P.J.Abdul Kalam is the "Missile Man" of India.He was the President of India from 2002 to 2007 .He was lovingly called the 'People's President.'

Q1.Let's see how much you know about Dr.Kalam:

1.Who was Dr.Kalam's mentor and guide

Ans. Dr.Vikram Sarabhai.

2.Where was Dr.Kalam born?

Ans. Rameshwaram,Tamil Nadu.

3.Which island is named after Abdul kalam?

Ans. Wheeler Island.

4.Dr.Kalam completed his aerospace engineering degree from which institute?

Ans. Madras Institute of Technology.

5.The Government of India has honouredDr.Abdul Kalam with which honour in 1997?

Ans. Bharat Ratna.

6.What is Dr.Kalam's dream for India called?

Ans. Vision 2020.