


HARI VIDYA BHAWAN
CLASS- NURSERY
SUBJECT – ENGLISH

Date: 25-01-2021

Instructions of worksheet:

- 1..please note from now onwards all worksheet should be completed in notebook of respective subjects.
- 2..these worksheet will be considered as your evaluation marks will be given on completion else you will have to appear for pen paper test once the school reopens.
- 3..Read every topic which will be given in worksheet of the chapter from your course book.
- 4..All the students must purchase course book as it will enable you to understand the chapter.
- 5..watch the video of related topic from your active app.
- 6..All queries regarding worksheet shall be resolved from 8 :00 am to 3:00pm.

Q1. Colour the vowel boxes.



Q2) Read and write these short vowel words from 'u'.

Mug
Jug
Bun
Hug
Sun
Run
Cut

Q2) Make word from letters A,B, C and D and write in your copy.

A - Apple	B - Ball	C – Cat	D- Dog

Q3. Learn phonic sounds from A to Z.

Q4. Read action words:-

Action Words

play 	eat 	watch 	drink 
read 	sing 	sleep 	run 
dance 	draw 	shop 	talk 
cook 	swim 	travel 	study 

HARI VIDYA BHAWAN
CLASS- K.G
SUBJECT – ENGLISH

Date: 25-01-2021

Instructions of worksheet::

- 1..please note from now onwards all worksheet should be completed in notebook of respective subjects.
- 2..these worksheet will be considered as your evaluation marks will be given on completion else you will have to appear for pen paper test once the school reopens.
- 3...Read every topic which will be given in worksheet of the chapter from your course book.
- 4..All the students must purchase course book as it will enable you to understand the chapter.
- 5..watch the video of related topic from your active app.
- 6...All queries regarding worksheet shall be resolved from 8 :00 am to 3:00pm.

Q1) Look at the pictures and add 's' if there are more than one. For more than one we say 'many'. (one has done for you and do it in your notebook).

ONE	MANY
• Cat	• Cats
• Jug	
• Tap	
• Pen	
• Cow	
• Tree	
• Mop	
• Plum	
• Drum	
• Flag	
• Plum	

Q2) Write these or those in the blanks, do it in your notebook.

Write these/those in the blanks.

1.  _____ are many drums.

2.  _____ are many cups. 

3.  _____ are many books.

4.  _____ are many pens. 

5.  _____ are many birds.

6.  _____ are many bugs. 

Q3) Reading practice:-

Read the story 'GOLDILOCKS AND THE THREE BEARS'.

(Page number 7 Course book A).

Q4) Read action words:-

Action Words

play 	eat 	watch 	drink 
read 	sing 	sleep 	run 
dance 	draw 	shop 	talk 
cook 	swim 	travel 	study 


हरि विद्या भवन

कक्षा -1

विषय- हिंदी

दिनांक – 25/1/2021

क) चित्र देखें, समझें एवं पाँच वाक्य लिखें ।



1. यह एक जन्मदिन का चित्र है।
2. आज मीनू का जन्मदिन है।
3. मीनू और सभी बच्चे बहुत खुशी हैं।
4. बच्चे मीनू के लिए उपहार लाए हैं।
5. बच्चे केक कटने के इंतजार कर रहे हैं।

ख) लिंग बदलो ।

1. दादा	दादी	16. बेटा	बेटी
2. सखा	सखी	17. बंदर	बंदरिया
3. तोता	तोती	18. अध्यापक	अध्यापिका
4. मोर	मोरनी	19. पुत्र	पुत्री
5. पड़ोसी	पड़ोसिन	20. गायक	गायिका
6. पिता	माता	21. घोड़ा	घोड़ी
7. चाचा	चाची	22. लेखक	लेखिका
8. भाई	बहन	23. नायक	नायिका
9. गुड्डा	गुड्डिया	24. ग्वाल	ग्वालिन
10. बच्चा	बच्ची	25. श्रीमान	श्रीमती
11. महाराज	महारानी	26. छात्र	छात्रा
12. बकरा	बकरी	27. वर	वधू
13. शेर	शेरनी	28. मोर	मोरनी
14. बैल	गाय	29. शेर	शेरनी
15. मालिक	मालकिन	30. सेठ	सेठानी

हरी विद्या भवन

कक्षा - 2

विषय - हिन्दी

व्याकरण

दिनांक - 25-01-2021

का
करे
।

निर्देश :

वर्क शीट
कार्य हिन्दी
कापी में
व याद करे

अब करने और नीचे

1. एकवचन-बहुवचन के सही जोड़े बनाओ और खाली जगह में लिखो—

तारा	माला	गुड़िया	बस्तुएँ	आदतें	बहुरें
लकड़ी	पहिया	आदत	बच्चे	दवाइयाँ	गुड़ियाँ
बच्चा	बालिका	बस्तु	पहिए	मालाएँ	तारे
बुद्धिया	बह	दवाई	बुद्धियाँ	बालिकाएँ	लकड़ियाँ

एकवचन	बहुवचन	एकवचन	बहुवचन
तारा	तारे		

2. विलोम शब्दों पर ✓ का निशान लगाओ—

i. सज्जन—
नेक दुर्जन वाचाल होशियार

ii. बलवान—
परिश्रमी निर्बल घमंडी ताकतवर

iii. लाभ—
फ़ायदा अहित हानि अपमान

iv. ईमानदार—
बेईमान नादान सफल अयोग्य

HARI VIDYA BHAWAN

CLASS- II

SUBJECT – MATHS

REVISION WORKSHEET

DATE –25- 1 – 2021

Note- DO THIS WORKSHEET IN YOUR COPY

Table –

$10 \times 1 = 10$	$11 \times 1 = 11$
$10 \times 2 = 20$	$11 \times 2 = 22$
$10 \times 3 = 30$	$11 \times 3 = 33$
$10 \times 4 = 40$	$11 \times 4 = 44$
$10 \times 5 = 50$	$11 \times 5 = 55$
$10 \times 6 = 60$	$11 \times 6 = 66$
$10 \times 7 = 70$	$11 \times 7 = 77$
$10 \times 8 = 80$	$11 \times 8 = 88$
$10 \times 9 = 90$	$11 \times 9 = 99$
$10 \times 10 = 100$	$11 \times 10 = 110$

Q-1. Choose wisely and solve these questions-

- a) $24 + 45 = 69$
- b) $33 - 7 = 26$
- c) $42 \div 6 = 7$
- d) $32 \times 4 = 128$
- e) $44 + 35 = 79$
- f) $55 + 6 = 61$
- g) $44 \div 4 = 4$
- h) $36 \div 6 = 6$
- i) $12 \div 2 = 6$
- j) $50 \times 34 = 1700$

हरि विद्या भवन

कक्षा - 3

विषय- हिंदी

दिनांक – 25/1/2021

क) गणतंत्र दिवस पर पाँच लाइनें लिखें।

ख) राष्ट्रीय ध्वज का चित्र बनाएँ और उस पर रंग भरे।

HARI VIDYA BHAWAN

REVISION WORKSHEET

CLASS-3

SUBJECT-MATHS

DATE: 25/01/2021

Note: - Do this worksheet in your class notebook.

Q1) Addition: -

$$\begin{array}{r} 1) \quad 393 \\ + 445 \\ \hline 838 \\ \hline \end{array}$$

$$\begin{array}{r} 2) \quad 578 \\ + 462 \\ \hline 1040 \\ \hline \end{array}$$

$$\begin{array}{r} 3) \quad 752 \\ + 429 \\ \hline 1181 \\ \hline \end{array}$$

$$\begin{array}{r} 4) \quad 706 \\ + 845 \\ \hline 1551 \\ \hline \end{array}$$

$$\begin{array}{r} 5) \quad 925 \\ + 584 \\ \hline 1509 \\ \hline \end{array}$$

$$\begin{array}{r} 6) \quad 693 \\ + 357 \\ \hline 1050 \\ \hline \end{array}$$

$$\begin{array}{r} 7) \quad 426 \\ + 138 \\ + 242 \\ \hline 806 \\ \hline \end{array}$$

$$\begin{array}{r} 8) \quad 625 \\ + 174 \\ + 65 \\ \hline 864 \\ \hline \end{array}$$

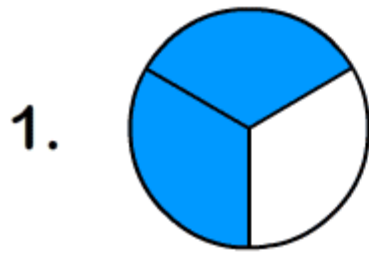
$$\begin{array}{r} 9) \quad 395 \\ + 257 \\ + 623 \\ \hline 1275 \\ \hline \end{array}$$

$$\begin{array}{r} 10) \quad 527 \\ + 146 \\ + 85 \\ \hline 758 \\ \hline \end{array}$$

$$\begin{array}{r} 11) \quad 749 \\ + 83 \\ + 506 \\ \hline 1338 \\ \hline \end{array}$$

$$\begin{array}{r} 12) \quad 673 \\ + 549 \\ + 376 \\ \hline 1598 \\ \hline \end{array}$$

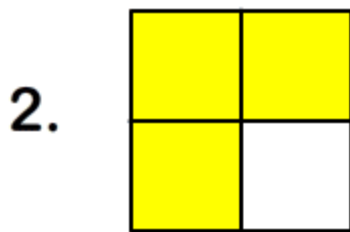
Circle the correct fraction from the given choices.



$$\frac{3}{4}$$

$$\frac{2}{3}$$


$$\frac{1}{4}$$



$$\frac{3}{4}$$

$$\frac{1}{5}$$


$$\frac{2}{3}$$



$$\frac{2}{4}$$

$$\frac{4}{5}$$

$$\frac{5}{6}$$



$$\frac{4}{8}$$

$$\frac{1}{3}$$

$$\frac{1}{2}$$

हरि विद्या भवन

कक्षा - 4

विषय- हिंदी

दिनांक – 25/1/2021

क) गणतंत्र दिवस पर एक नोट लिखें।

ख) राष्ट्रीय ध्वज का चित्र बनाएँ और उस पर रंग भरे।

HARI VIDYA BHAWAN

MATHEMATICS (Revision Worksheet – 4) Class – 4th

Date: 25-1-2021

Instructions:

Do this worksheet in your notebook.

Q1. Solve these.

- (a) 259×562
- (b) 235×483
- (c) $8885 \div 6$
- (d) $1116 \div 9$
- (e) $1612 \div 4$

Q2. Learn and write tables 15 to 20.

Q3. Write any seven multiples of 12.

Q4. Write the following numbers in words.

- (a) 2,465
- (b) 1,094
- (c) 6,84,789
- (d) 20,785
- (e) 4,56,720

हरि विद्या भवन

कक्षा - 5

विषय- हिंदी

दिनांक – 25/1/2021

क) गणतंत्र दिवस पर एक नोट लिखें।

ख) राष्ट्रीय ध्वज का चित्र बनाएँ और उस पर रंग भरे।

HARI VIDYA BHAWAN

MATHEMATICS (Revision Worksheet – 4) Class – 5th

Date: 25-1-2021

Instructions:

Do this worksheet in your notebook.

Q1. If the cost of 8kg oranges is Rs. 680, what will be the cost of 12kg oranges?

Solu. Cost of 8kg oranges = Rs. 680

Cost of 1kg oranges = $680 \div 8 = \text{Rs. } 85$

Cost of 12 kg oranges = $85 \times 12 = \text{Rs. } 1,020$

Q2. A bus can cover 160km in 4hours. How much distance can it cover in 9 hours if it moves at the same speed?

Solu. Distance cover in 4hours = 160km

Distance cover in 1hour = $160 \div 4 = 40\text{km}$

Distance cover in 9hours = $40 \times 9 = 360\text{km}$

Q3. Which is better buy – 5 glasses of juice for Rs. 75 or 12 glasses juice for Rs. 192?

Solu. Cost Of 5 glasses juice = Rs. 75

Cost of 1 glass juice = $75 \div 5 = \text{Rs. } 15$

Cost of 12 glasses juice = Rs. 192

Cost of 1 glass juice = $192 \div 12 = \text{Rs. } 16$

5 GLASSES JUICE IS BETTER TO BUY.

- **FORMULA**
- **Cost of many units ÷ cost of one unit x cost of desired units.**

FORMULA..

- MORE NUMBER / LESS NUMBER x DAYS
- LESS NUMBER / MORE NUMBER x DAYS

Q4. If 60 cows can graze on a field for 12 days, then how long can 40 cows graze on the same field?

Ans. 60 cows graze = 12 days

40 cows graze = ?

More no. of cows/ Less no. of cows x days

$60/40 \times 12 = 1.5 \times 12 = 18\text{days}$

Q5. If 8 workers can build a road in 6 days, how many days will 3 workers take to build the same road?

Ans. 8 workers = 6days

3 workers = ?

$8/3 \times 6 = 2.6 \times 6 = 16\text{days}$