

HARI VIDYA BHAWAN

SOCIAL SCIENCE

WORKSHEET – 2

Class :- 6 Date : 24.03.2020

Q) State whether true or false :-

- 1) Coal is a solid fuel. _____
- 2) People with different cultural and regional background have same likes and dislikes. _____
- 3) The moon is 384000 kms away from the Earth. _____
- 4) Pluto was the first man made satellite. _____
- 5) Valentina Tereshkova was the first woman to go into the space.

- 6) The process of elections is taken care by the Elections Commission. _____
- 7) Gandhiji returned to India in 1915. _____
- 8) Indian National Congress was divided into four groups. _____
- 9) The Simon Commission had been appointed by the British government in 1927. _____
- 10) The World War II had broken out in 1939. _____
- 11) Tribals cut the trees to clear a patch of forest for farming.

- 12) A Tsunami is caused by an earthquake or volcanic eruption under the sea. _____
- 13) The oil in its natural state is known as crude oil. _____
- 14) Solar energy and wind energy are non-renewable fuels.

- 15) Van Mahotsav is observed every year to cut the trees.

- 16) UNICEF organisation provides Medical Services and medicines for the affected people. _____

HARI VIDYA BHAWAN

Worksheet – 2

Class – VI

Subject : Mathematics

Date 24.03.2020

Q1. Use the given digits without repetition and make greatest and smallest 4-digit numbers.

(a) 2,8,7,4

Greatest number _____

Smallest number _____

(b) 9,4,7,1

Greatest number _____

Smallest number _____

(c) 4,7,5,0

Greatest number _____

Smallest number _____

(d) 1,7,6,2

Greatest number _____

Smallest number _____

(e) 5,4,0,3

Greatest number _____

Smallest number _____

(f) 3,8,7,2,

Greatest number _____

Smallest number _____

(g) 9,0,5,7

Greatest number _____

Smallest number _____

(h) 0,4,5,3

Greatest number _____

Smallest number _____

HARI VIDYA BHAWAN

SOCIAL SCIENCE


CLASS - 7

WORKSHEET - 2


Date 24.03.2020

Que. Draw a labelled diagram of the following:

- Layers of atmosphere



- Volcanic Eruption



HARI VIDYA BHAWAN

Worksheet – 2

Class – VII

Subject : Mathematics

Date 24.03.2020

Q.1. Can you find a pattern for each of the following? If yes, complete them:

(a) 7, 3, -1, -5, _____, _____, _____.

(b) -2, -4, -6, -8, _____, _____, _____.

(c) 15, 10, 5, 0, _____, _____, _____.

(d) -11, -8, -5, -2, _____, _____, _____.

Q.2. Write down a pair of integers whose

(a) sum is -3

(b) difference is -5

(c) difference is 2

(d) sum is 0

HARI VIDYA BHAWAN

SOCIAL SCIENCE

CLASS - 8

WORKSHEET - 2

Date 24/03/2020

Que. Fill in the blanks:

1. The _____ is the domain that consists of water.
2. The _____ environment consist of biotic and abiotic components.
3. The Indian government has considered the Right to Life as a _____ right.
4. The chief minister is appointed by the _____.
5. Quit India Movement was launched in _____.
6. _____ was the founder of the Mughal Empire in India.
7. _____ is an example of extrusive igneous rock.
8. A _____ records the intensity of the waves of an earthquake.
9. Giving special names to a product by a company is called _____.
10. All India Radio is known as _____.
11. Doordarshan was launched in _____.
12. The _____ is the lowermost atmospheric layer.
13. _____ started the construction of Qutub Minar.
14. India became independent on _____.
15. Jallianwala Bagh massacre took place on _____.

HARI VIDYA BHAWAN

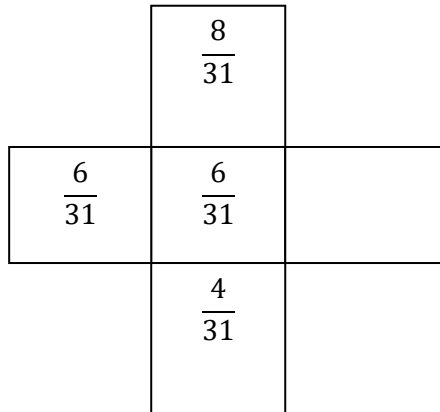
Worksheet – 2

Class – VIII

Subject : Mathematics

Date 24.03.2020

Q1. If the sum of both the horizontal and the vertical rows is same, find the missing rational number.



Q2. What is the multiplicative inverse of $\frac{6}{16}$?

Q3. Reduce the rational number $\frac{18}{15}$ to its lowest form.

Q4. Reduce the rational number to its lowest form.