

HARI VIDYA BHAWAN

CLASS :- Nursery

SUBJECT :- ENGLISH

TOPIC - SLANTING LINES

WORKSHEET :- 3

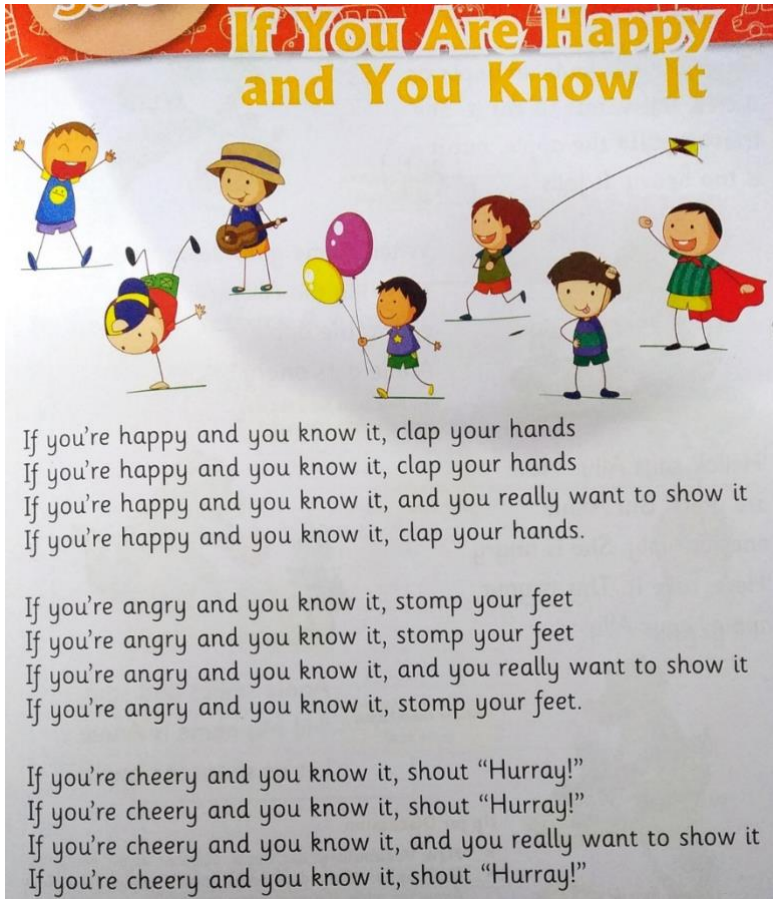
Date :- 19th April 21 / Day :- Monday

Instructions :-

- Please note from now onwards all worksheet should be completed in notebook of respective subject.
- These worksheet will be considered as your periodic test, mark will be given on completion else you will have to appear for pen paper test ones the school reopens.
- Read every topic which will be given in worksheet of the chapter from your course book.
- All the students must purchase course books as it will enable you to understand the chapter.
- All queries regarding worksheet shall be resolved from 8:00 am to 1:30 pm.
- Watch the video of chapter -1 given in Pearson App.


Fun time

Note – Dear students, after learning this Rhyme { If you are happy and you know it } you have to make a video on it and send in the group.



Learning Time

Q 2 :- Trace and write Slanting Lines.



Note – Do page no – 6 and 7 in your English Application Book – A.

HARI VIDYA BHAWAN

CLASS :-K.G.

SUBJECT :- ENGLISH

TOPIC :- PHONIC REVIEW

WORKSHEET - 3



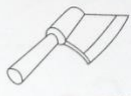
Date :- 19th April 21 / Day :- Monday




Instructions :-




- Please note from now onwards all worksheet should be completed in notebook of respective subject.
- These worksheet will be considered as your periodic test, mark will be given on completion else you will have to appear for pen paper test ones the school reopens.
- Read every topic which will be given in worksheet of the chapter from your course book.
- All the students must purchase course books as it will enable you to understand the chapter.
- All queries regarding worksheet shall be resolved from 8:00 am to 1:30 pm.
- Watch the video of Topic – Phonic Review given in Pearson App.




Learning Time




Q 1 :- Colour the pictures that begin with the given sound.

Aa   

Bb   

Cc   

Dd   

Ee   

Circle the pictures that begin with the given sound.

Ff   

Gg   




Hh   




Ii   




Jj   




Kk   




Tick (✓) the pictures that begin with the given sound.

Ll   




Mm   




Nn   




Oo   




Pp   




Circle the pictures that begin with the given sound.


Qq   

Rr   

Ss   

Tt   

Uu   



Find The Partner

Q 2 :- Match the capital and small letters. (**Do this work in your English notebook**)

A	d
D	g
E	i
G	a
I	m
K	t
M	e
P	r
R	p
T	k

NOTE :- Do page no – 4 in your English Application Book – A.

HARI VIDYA BHAWAN

CLASS -I

SUBJECT – ENGLISH

WORKSHEET – 5

CHAPTER – 1 MILI’S SCRAPBOOK

Do this work in your Book and Notebook.

Date – 19.04.21

Instructions:-

- * Please note from now onwards all worksheet should be completed in Notebook of respective subjects.**
- * These worksheet will be considered as your periodic test, marks will be given on computation else you will have to appear for pen paper test ones the school reopen.**
- * Read every topic which will be given in worksheet of the chapter from your course book.**
- * All students must purchase course book as it will enable you to understand the chapter.**
- * All queries regarding worksheet shall be resolved from 8:00 a.m. to 3:00 p.m.**
- * Watch the video of chapter 1 given in the Next Curriculum App.**

MILI'S SCRAPBOOK

NAMING WORDS

Q1. What are Naming words?

Ans – Words that name a person , place, an animal or a thing are called Naming Words.

Q2. Draw the table in your notebook . Sort the naming words and write them in the correct boxes.

Tarun	Pilot	Car	Lion	Aunt	Fish	Cat
Shop	Ball	School	Farm	Fan	Book	Pencil
Rabbit	Classroom					

Ans :	NAME	PLACE	ANIMAL	THING
	Tarun	Shop	Lion	Car
	Pilot	School	Fish	Ball
	Aunt	Farm	Cat	Fan
		Classroom	Rabbit	Book
				Pencil

Do this work in your English Book A :

(Do this question yourself)



Circle the naming part in each of these sentences. Then, colour each bird to match the sentences.

- (a) The black bird is pecking at a fruit.
- (b) The brown bird is eating a worm.
- (c) The orange bird is sitting on the bird bath.
- (d) The yellow bird has a long beak.
- (e) The blue bird and the red bird are sitting together on a branch.



2. Fill in the blanks using the picture clues.

(a) The dog is playing with a ball.



(b) The cat is drinking milk.



(c) The cow is eating grass.



(d) The pig is playing in the mud.




(e) The frog is sleeping on a log.



2. Label these nouns. One has been done for you.




Doctor
Person



Pen
Thing



Sparrow
Animal



Tailor
Person



Teddy Bear
Thing




Donkey
Animal



Park
Place



Bottle
thing



Teacher
Person



Railway Station
Place



Rabbit
Animal



Farm
Place

- Look around your home, classroom and school. Write two naming words each for a person, place, an animal and a thing.
- Write three sentences of your own. Circle the nouns in each sentence.

हरी विद्या भवन

कक्षा-1

वर्कशीट 3

विषय- हिंदी

पाठ 2- चिकी का घर

दिनांक:19/.04/.21

कार्यपत्रक के निर्देश-

- 1.अब से सभी संबंधित विषयों की वर्कशीट नोटबुक में पूरा करना अनिवार्य है
- 2.यह वर्कशीट आपके periodic test के रूप में जानी जाएगी, इसके पूरे होने पर ही आपको अंक दिए जाएंगे अन्यथा स्कूल खुलने पर आपको पेन पेपर टेस्ट देना होगा ।
- 3.हर विषय को पढ़े जो आपके पाठ्यक्रम की पुस्तक के अध्याय की वर्कशीट में दिया जाएगा ।

4.सभी छात्रों को पाठ्यक्रम के पुस्तक खरीदनी चाहिए क्योंकि यह आपको अध्याय को समझने में सक्षम होगी।

5.Next Curriculum एप्लीकेशन का वीडियो देखें।

वर्कशीट से संबंधित सभी प्रश्नों को सुबह 8.00 बजे से

अपराह्न 3.00 बजे तक हल किया जाएगा।

चिकी का घर

प्र1. किन किन जानवरों का घर ज़मीन के अंदर होता है?

उत्तर. चूहा , सांप, केंचुआ , खरगोश आदि ।

प्र2. किन किन जानवरों का घर पानी होता है ?

उत्तर . मछली , सांप , ऑक्टोपस , दरियाई घोड़ा आदि।

प्र3. किसका घर पेड़ होता है?

उत्तर . गिलहरी , चिड़िया , बंदर , चींटी आदि ।

HARI VIDYA BHAWAN

CLASS - II

SUBJECT – COMPUTER

WORKSHEET – 3

Date – 19.04.21

Instructions:-

- * Please note from now onwards all worksheet should be completed in Notebook of respective subjects.
- * These worksheet will be considered as your periodic test, marks will be given on computation else you will have to appear for pen paper test ones the school reopen.
- * Read every topic which will be given in worksheet of the chapter from your course book.
- * All students must purchase course book as it will enable you to understand the chapter.
- * All queries regarding worksheet shall be resolved from 8:00 a.m. to 3:00 p.m.

Q1 . Tick the correct answer :

In _____ computers are used for preparing exam result

- (a) School**
- (b) Office**
- (c) Bank**

Ans .(a) School

In offices a computer helps in _____ documents

- (a) Playing**
- (b) Drawing**
- (c) Printing**

Ans. © Printing

At railway station computers helps in booking _

- (a) Fees**
- (b) Tickets**
- (c) Recording**

Ans – (b) Tickets

In _____ computers are used for keeping records of patients

- (a) School
- (b) Office
- (c) Hospital

Ans. © Hospital

Q2. Write T for True and F for false statements :

- 1. Computers can do only one type of work - F
- 2. In banks computers are used for playing games -F
- 3. Computers can not be used in designing -F
- 4. Scientists use computer for their research work -T

HARI VIDYA BHAWAN

CLASS :-2nd

SUBJECT :-VALUE EDUCATION

TOPIC :- TEAMWORK

WORKSHEET - 3

Date :- 19th April 21 / Day :- Monday

Instructions :-

- Please note from now onwards all worksheet should be completed in notebook of respective subject.
- These worksheet will be considered as your periodic test, mark will be given on completion else you will have to appear for pen paper test ones the school reopens.
- Read every topic which will be given in worksheet of the chapter from your course book.
- All the students must purchase course books as it will enable you to understand the chapter.

All queries regarding worksheet shall be resolved from 8:00 am to 1:30

WORD MEANING

- **Paw-** the foot of animals
- **Mice-** small animal with fur
- **Trouble-** a problem
- **Screamed-** to cry out loudly
- **Surprised-** showing surprise

ANSWER THE FOLLOWING QUESTIONS:-

Q-1 Why did the donkey decided to leave the farmhouse?

Ans- One day , he decided to go to the bremen to become a musician.

Q-2 Why didn't the master of the dog need him anymore?

Ans- I am old and cannot run. So, my master doesn't want me anymore.

Q-3 Why was the rooster scared?

Ans- I am in trouble. I heard the farmer's wife tell the cook to put me in the soup tomorrow.

Q-4 How did the four friends plan to scare the robbers away?

Ans- The four animals started singing so loudly that they broke the windows.

'Yahoo! Bow, wow! Miaowoooooo! Cock-a-doodle do!'

True/false:-

- WRITE T FOR TRUE AND F FOR FALSE STATEMENTS
- (a) The donkey had accidently stepped on a dog's tail. F
 - (b) Nobody wanted the cat because she was old and could not catch fish. F
 - (c) The four friends started searching for a place to sleep because Bremen was far off. T
 - (d) The robbers thought that ghosts had come into the house. T
 - (e) The four friends liked Bremen so much that they decided to stay there forever. T

Next curriculum app

HARI VIDYA BHAWAN

CLASS – 3

SUBJECT – ENGLISH

WORKSHEET – 5

CHAPTER – 2 TED


- **Do this work in your NOTEBOOK .**

Date – 19/04/2021


Instructions: -

- * Please note from now onwards all worksheet should be completed in Notebook of respective subjects.
- * These worksheet will be considered as your periodic test, marks will be given on computation else you will have to appear for pen paper test ones the school reopen.
- * Read every topic which will be given in worksheet of the chapter from your course book.
- * All students must purchase course book as it will enable you to understand the chapter.
- * All queries regarding worksheet shall be resolved from 8:00 a.m. to 1:30 p.m.
- * Watch the video of chapter – 2 given in the Next Curriculum App.


Q1. Complete the exercise in the Get Set Junction of Book A by yourself.



2 Ted

Get Set 

This is Lata, and these are her pet kittens, Nutty and Brownie. They are best friends. Lata plays with Nutty and Brownie, and cares for them. Nutty and Brownie also love Lata a lot.



Do you have a pet? _____

Would you like to have one? _____

Which animal would you like as a pet?

Discuss with your friends and find out which animals they want as pets. Also find out the reason behind their choice.

Stick a picture or draw an animal of your choice.

B. Let us read between the lines.

1. Explain the line, “ Daddy says he won’t be larger” .

- **Daddy says he won’t grow larger because Ted is a small dog and cannot grow very large even when he is older.**

2. Why does Ted ever growl or bite the poet?

- **Ted never growls or bites the poet because it loves the poet just like she loves him.**

3. Explain the phrase, “play fetch”.

- **Fetch is a game we play with our pets. One throws a ball or any other object and the dog goes and gets it back.**

HARI VIDYA BHAWAN
CLASS-4
SUBJECT – MATHEMATICS
Ch-1 LARGE NUMBERS
WORKSHEET – 4

Date: 19.04.2021

INSTRUCTION:

- Please note from now onwards all worksheet should be completed in notebook of respective subjects.
- These worksheets will be considered as your periodic test, marks will be given on completion else you will have to appear for pen paper test once the school reopens.
- Read every topic which will be given in worksheet of the chapter from your course book.
- All the students must purchase course book as it will enable you to understand the chapter.
- Watch the video of Chapter – 1 in the next curriculum app.
- All queries regarding worksheet shall be resolved from 8:00am to 3:00pm.

Q1. Compare the numbers and Put the correct sign (< , > and =)

- a) 34,568 = 34,568
- b) 76,809 < 2,32,556
- c) 7,65,789 > 7,56,879
- d) 2,57,834 > 2,57,384

Q2) Choose the correct option:-

a) Which of these numbers come between 1496 and 1946?

- i) 1469 **ii) 1694(✓)** iii) 1964 iv) 1466

b) The population of a Palampur is 56,456 while that of Pankh Nagar is 1,56,456 . Which place has lesser population?

i) Palampur(✓)

ii) Pankh Nagar

Q3) Arrange the numbers in ascending order :-

a) 91,977 , 99,977 , 71,997 , 71,799 , 19,977

Ans:- 19,977 , 71,799 , 71,997 , 91,977 , 99,977

b) 5,20,694 , 5,20,946 , 5,91,046 , 4,60,095 , 4,06,590

Ans:- 4,06,590 , 4,60,095 , 5,20,694 , 5,20,946 , 5,91,046

Q4) Arrange the number in descending order:-

a) 31,067 , 30,167 , 36,170 , 37,016 , 31,670

Ans:- 37,016 , 36,170 , 31,670 , 31,067 , 30,167

b) 8,90,568 , 9,08,658 , 9,06,858 , 9,05,688 , 8,06,588

Ans:- 9,08,658 , 9,06,858 , 9,05,688 , 8,90,568 , 8,06,588

Q5) Arrange the digits to form the largest and smallest number without repeating any digit.

a) 2, 7 , 3, 6 ,4

- Largest number - **76,432**
- Smallest number - **23,467**

b) 9,0,7,6,8,2

- Largest number - **9,87,620**
- Smallest number - **2,06,789**

c) 3, 8, 0,9,2

- Largest number - **98,320**
- Smallest number - **20,389**

Q6) Arrange the digits to form the largest and the smallest number with repetition of any digits.

a) 9,0,7

- Largest number - **99,970**
- Smallest number - **70,009**

b) 6,2,9,3

- Largest number - **99,632**
- Smallest number - **22,369**

c) 7,9,2,1

- Largest number - **99,721**
- Smallest number - **11,271**

Hari Vidya Bhawan

Class-5

Sub EVS

Chapter -02(OUR MUSCULAR SYSTEM)

Date – 19/04/21

Work sheet-5

Instructions:-

* Please note from now onwards all worksheet should be completed in Notebook of respective subjects.

* These worksheet will be considered as your periodic test,

marks will be given on computation else you will have to appear for pen paper test ones the school reopen.

* Read every topic which will be given in worksheet of the

chapter from your course book.

* All students must purchase course book as it will enable you

to understand the chapter.

- * All queries regarding worksheet shall be resolved from 8 a.m. to 3pm.
- * Watch the video of ch-2 from next curriculum app.

Page no-14

Q. 2 What is a tendon ? How is it useful?

Ans. A tendon is tough fibrous tissue that connects a muscles to a bone and helps in movement.

3. Fill in the blanks.

(a) Contraction and relaxation of muscles cause movement of body parts.

(b) About 40 Percent of the body weight is due to the muscles.

(c) The muscles in body make the muscular system.

14

Next Explorers

Q. 3 Fill in the blanks.

Page no- 16

Q.1 Write a short note on skeletal muscles.

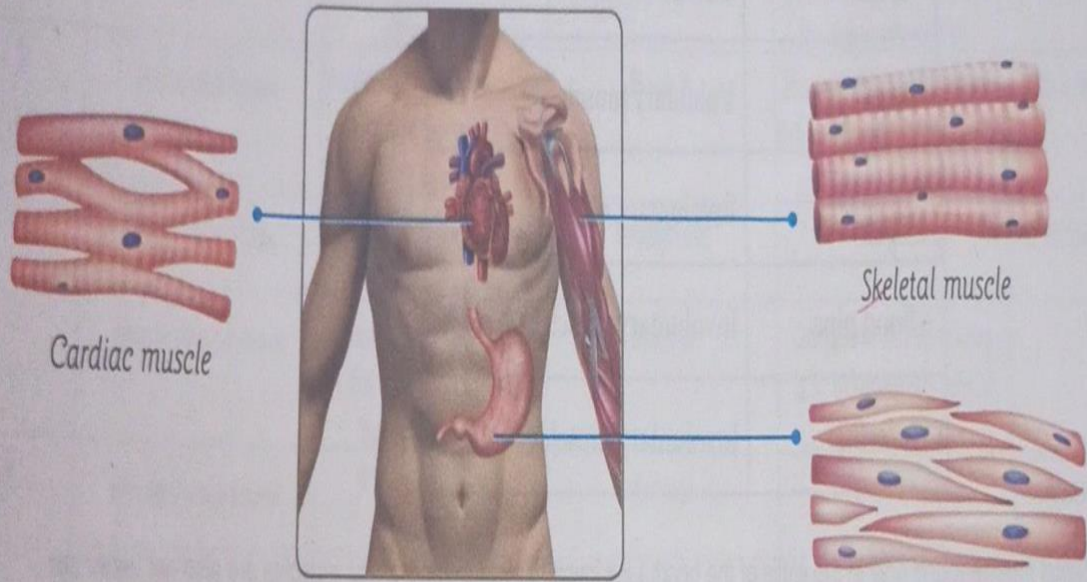
Ans. The muscles that are attached to our external organ like legs ,arms, shoulders, face and neck and help in their movement are called skeletal muscles . For example chewing food ,smiling ,walking and talking. These moments and activities can be

controlled and performed at our will . Hence ,these muscle are also called voluntary muscles.

Q.2 Draw neat diagrams of all types of Muscles and label them.

Ans.

2.



Cardiac muscle

Skeletal muscle

Smooth muscle

Types of muscles

Q. 3 Tick (✓) the correct answer and complete each of the following sentences.

19 Next Explorers

i) voluntary ii) cardiac
through the entire body.

(b) The main function of cardiac muscle is to continuously pump blood.

i) smooth ii) skeletal

(c) The muscles in our oesophagus are smooth.

i) voluntary ii) involuntary

(d) Involuntary muscles are not in our control.

i) skeletal ii) smooth

Skeletal muscles to clap.

(e) Rahul's mother saw him score a goal. So she started clapping. She used

3. TICK (✓) THE CORRECT ANSWER AND COMPLETE EACH OF THE FOLLOWING SENTENCES.