

**HARI VIDYA BHAWAN  
CLASS- NURSERY  
SUBJECT – ENGLISH  
REVISION WORKSHEET - 2**

**Date: 17-02-2021**

**Instructions of worksheet::**

- **1..please note from now onwards all worksheet should be completed in notebook of respective subjects.**
- **2..these worksheet will be considered as your evaluation marks will be given on completion else you will have to appear for pen paper test once the school reopens.**
- **3...Read every topic which will be given in worksheet of the chapter from your course book.**
- **4..All the students must purchase course book as it will enable you to understand the chapter.**
- **5..watch the video of related topic from your active app.**
- **6...All queries regarding worksheet shall be resolved from 8 :00 am to 3:00pm.**

**Q1) Read and write these short vowel words from ‘i’ and ‘o’.**

<b>Pin</b>	<b>Dog</b>
<b>Bin</b>	<b>Log</b>
<b>Fig</b>	<b>Top</b>
<b>Pit</b>	<b>Mop</b>
<b>Six</b>	<b>Hop</b>
<b>Sit</b>	<b>Cot</b>
<b>Dig</b>	<b>Fox</b>
<b>Kid</b>	<b>Box</b>

**Q2. Write missing letters:-**



## Write Missing Letters

1 A ... C..... E.... G..... I ....

2 S ... U..... W.....Y.....

3 F .... H..... J..... L.....

4 P .... R.....T.... V.....

5 O .... Q.... S.....U.....W...

6 M..... O..... Q..... S.....

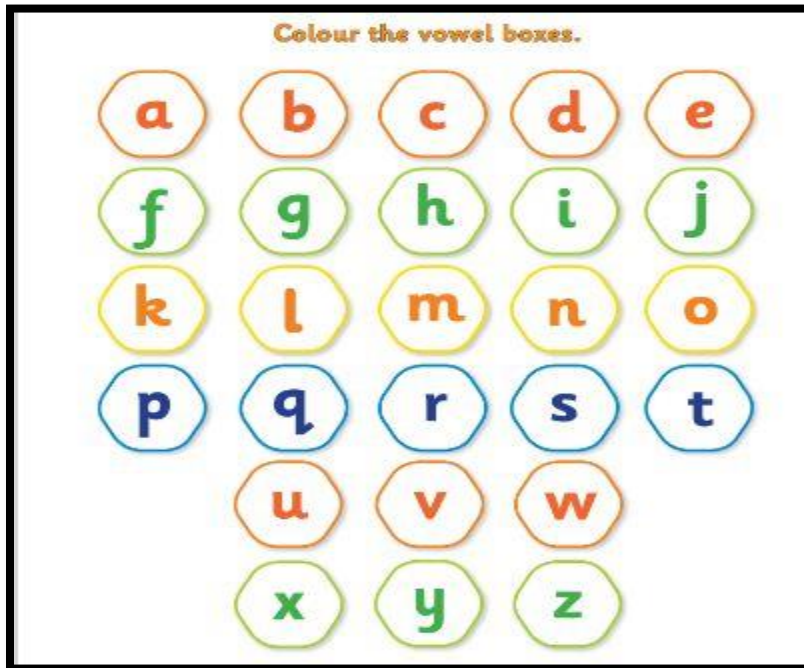
7 S ..... U.... W.....Y.....

8 B....D.....F.....H.....J.....


9 G....I.....K.....M....O.....

10 F.....H.....J.....L.....

Q3. Circle the vowel:-



Q4. Write the missing letter (No need to draw picture).



**HARI VIDYA BHAWAN**  
**CLASS- K.G**  
**SUBJECT – ENGLISH**  
**REVISION WORKSHEET- 2**

**Date: 17-02-2021**

**Instructions of worksheet::**

- 1..please note from now onwards all worksheet should be completed in notebook of respective subjects.
- 2..these worksheet will be considered as your evaluation marks will be given on completion else you will have to appear for pen paper test once the school reopens.
- 3...Read every topic which will be given in worksheet of the chapter from your course book.
- 4..All the students must purchase course book as it will enable you to understand the chapter.
- 5..watch the video of related topic from your active app.
- 6...All queries regarding worksheet shall be resolved from 8 :00 am to 3:00pm.

**Q1) Learn and Write any 5 words with long vowel sounds of 'ee' and 'oo'.**

<b>Long vowel 'ee'</b>	<b>Long vowel 'oo'</b>
<b>Jeep</b>	<b>Book</b>
<b>Feet</b>	<b>Cook</b>
<b>Beet</b>	<b>Wood</b>
<b>Sheet</b>	<b>Foot</b>
<b>Weep</b>	<b>Wool</b>
<b>Bee</b>	<b>Hook</b>
<b>tree</b>	<b>Moon</b>
<b>Seed</b>	<b>Food</b>
<b>Peel</b>	<b>Roof</b>
<b>Cheek</b>	<b>School</b>

**Q2) Learn and write words that go together:-**

- **Table and chair**
- **Lock and key**
- **Bread and butter**
- **Horse and cart**
- **Bat and ball**
- **Shoes and socks**
- **Paper and pencil**
- **Cup and saucer**

**Q3) Write Rhyming word.**

1. **Mug – bug**
2. **Top – mop**
3. **Ice – mice**
4. **Cake – bake**
5. **Bone – cone**

**HARI VIDYA BHAWAN**

**CLASS :- 1**

**MATHS REVISION WORKSHEET - 2**

Date :- 17.2.21 / Day :- Wednesday

**Instructions :- Do this work in your Maths notebook .**


**Q 1 :- Fill in the blanks.**

1. It is Wednesday today.
2. Tomorrow is Thursday.
3. It was Tuesday yesterday.
4. Saturday comes after Friday.
5. Monday is the first day of the week.
6. April comes between March and May.
7. Thursday is the fourth day of the week.
8. June is the sixth month of the year.

9. The hour hand is at 4 and minute hand is at 12. It is 4 o'clock.

10. The hour hand is at 9 and minute hand is at 12. It is 9 o'clock.

Q 3 :- Draw the hour hand and minute hand to show 7 o'clock.



Q 4 :- Write the number names for these numbers. Write them in tens and ones too.

Number	Number name	Tens	Ones
1. 7 5			
2. 3 2			
3. 5 5			
4. 4 9			

Q 5 :- What comes **after** , **before** and **between**.

	Before	Between	After
1.	_____	7 9	_____
2.	_____	8 0	_____
3.	2 1	_____.	2 3
4.	9 8	_____	100

Q 6 :- Write backward counting from **50 to 1**.

Q 7 :- Put the sign with **>** , **<** or **=**

1.  $68 \geq 54$

2.  $91 \leq 100$

3.  $59 \leq 85$

4.  $42 = 42$



**Q 8 :- Write number names from 1 to 50.**

# HARI VIDYA BHAWAN

SUBJECT – MATHS

Revision worksheet -2

Class – II

DATE – 17-2-2021

INSTRUCTIONS-

Read all questions very carefully

Do this in your subject copies respectively

**Q-1. Count the total number of fruit and vegetable seeds sown in the farm.**

a) 90 lemon seed + 30 lemon seeds =  lemon seeds.

b) 54 tomato seeds + 69 tomato seeds =  tomato seeds.

c) 36 capsicum seeds + 47 capsicum seeds =  capsicum seeds.

d) 44 brinjal seeds + 67 brinjal seeds =  brinjal seeds.

e) 75 cucumber seeds + 48 cucumber seeds =  cucumber seeds.

**2. Chahat has Rs. 46 and her friend Raj has Rs. 67. Who has more money?**

**Ans- Raj Rs.21 more than Chahat. There can be different combination of notes And coins to show an amount Rs. 21. One of the best answers is to show a note Of Rs.20 and a coin of Rs.1.**

**Ans- Rs.80, Rs10. There can be different combinations of notes and coins to show**

**An amount of Rs.10. one of the best answers is to show a note of Rs.10 or a coin**

**Of Rs.10.**

**3. Chahat buys a colour box worth Rs.60, a sketch book worth Rs.28 and a Notebook worth Rs.12. she gives Rs. 100 to the shopkeeper. Will the shopkeeper**

**Return the money if yes how much?**

**Ans- No, the shopkeeper will not return any money.**

**Q-4. Fill in the blanks-**

**a)  $122 + 641 = 763$**

**b)  $564 - 153 = 411$**

**c)  $333 + 654 = 987$**

**d)  $210 + 111 = 321$**

**Q-5. 312 Birds were sitting on a tree. 213 more birds join them. How many birds are sitting on the tree now?**

**Ans- 515 birds are there now.**

**Q-6. Rahul has 24 bananas. His friend Akshay gives 10 bananas to him. How many bananas does Rahul have now?**

**Do you need add or subtract to solve this words problem?**

**Ans- Add.**



**HARI VIDYA BHAWAN**  
**REVISION WORKSHEET-5**  
**CLASS-3**  
**SUBJECT-ENGLISH**

**DATE: 17/02/2021**

**Note: - Do this worksheet in your class notebook.**

**Q1) Write an application to your principal for sick leave.**

**To**

**The Principal,**

**Hari Vidya Bhawan School**

**K-II-600, Sangam-Vihar,**

**New-Delhi-110062**

**Subject- Application for sick leave.**

**Respected Sir/Ma'am,**

**I would like to inform you that I am a student of class-III.**

**I have been suffering from fever since yesterday. My doctor has advised me rest for two days. So, I cannot attend the school. Kindly grant me leave for two days.**

**I shall be very grateful to you.**


**Thanking you.**

**Your Obediently**

**Name: \_\_\_\_\_**

**Class- III**

**Q2) Write an essay on 'Cow'.**



**A cow is a domestic animal. Cows are one of the most innocent animals who are very harmless. People keep cows at their homes for various benefits. Cows are four-footed and have a large body. It has two horns, two eyes plus two ears and one nose and a mouth. Cows are herbivorous animals. They have a lot of uses to mankind. In fact, farmers and people keep cows at their homes for the same**

हरि विद्या भवन

कक्षा - 3

विषय- हिंदी

Revision worksheet - 3

दिनांक - 17/2/2021

निर्देश :-

अपनी स्कूल नोटबुक में इस वर्कशीट का अभ्यास करें।

क) दिए गए प्रश्नों के सही विकल्प पर (✓) का निशान लगाएँ।

1) चुनमुन पत्तों के हिलने का राज़ जाना चाहती थी।

i) सही (✓)

ii) गलत

2) झरने में पानी पीकर चिड़िया शहर की ओर चल पड़ी।

i) सही

ii) गलत (✓)

3) हिमालय पर बर्फ़ में जाकर हो जाता हूँ \_\_\_\_\_

i) ठंडा (✓)

ii) गर्म

4) हथकरघा शब्द का क्या अर्थ होता है?

i) हाथ की मशीनों से बुनाई करना (✓)

ii) बाँस की सहायता से किया जाने वाला नृत्य

5) उगते सूरज की धरा \_\_\_\_\_ को कहा जाता है।

i) मेघालय

ii) अरुणाचल प्रदेश (✓)

**ख) दिए गए प्रश्नों के उत्तर लिखें:-**

1) पक्षी आसमान में उड़ते हैं, मनुष्य क्यों नहीं?

उत्तर- क्योंकि उड़ने के लिए पंखों की आवश्यकता होती है।

2) चाँद रात में दिखता है, दिन में क्यों नहीं?

उत्तर- चाँद दिन में सूर्य की रोशनी की वजह से नहीं दिखता।

3) बादलों में पानी कहाँ से आता है?

उत्तर- बादल जब ठंडी हवा से टकराते हैं, तो इनमें रहने वाले भाँप के कण पानी में बदल जाते हैं।



HARI VIDYA BHAWAN

Ch. 10

MATHEMATICS (Revision Worksheet 3)

Class – 4<sup>th</sup>

Date: 17-02-2021

**Instructions:**

**Do this worksheet in your notebook.**

Q1. Write the time in 24hours format.

- (a) 9:30am = 9:30hours
- (b) 12:45pm = 12:45hours
- (c) 1:40pm = 13:40 hours
- (d) 10:30am = 10:30hours
- (e) 4:50am = 4:50hours

Q2. Write the time from given clue.

- (a) 2 hours after 1:14 pm = 3:14pm
- (b) 3 hours before 22:10hours = 7:10pm
- (c) 3 hours before 6:30pm = 3:30pm
- (d) 5 hours after 7:00pm = 12midnight

Q3. Tripti reaches the bus stand at 5:48pm. The bus she has to board is schedule to leave at 16:48 hours. Did she catch or miss the bus?

**Ans. She is late by 1 hour so, She missed the bus.**

Q4.The Christmas vacation of a school starts on 24<sup>th</sup> December and lasts for 18 days. On which date will the school reopen?

**Ans. 11<sup>th</sup> January**

Q5. Fill in the blanks.

- (a) The leap year comes after every 4 years.
- (b) The year 1996 is a leap year. (Yes/No) yes
- (c) The leap years between the years 2000 and 2020 are 4.

**HARI VIDYA BHAWAN**  
**CLASS – 5<sup>th</sup>**  
**SUBJECT – MATHEMATICS**  
**PRACTICE WORKSHEET**

Date:- 17-02-2021

**INSTRUCTIONS:**

Do this worksheet in your notebook.

**Q1. Convert the given percentages to fraction in their lowest terms.**

1. 8%
2. 15%
3. 45%
4. 75%
5. 12%

**Q2. Convert the given percentage to decimal:-**

1. 2%
2. 13%
3. 27%
4. 70%
5. 85%

**Q3. Write the numbers in words in International numeration system:-**

1. 78,654,345
2. 7,326,520
3. 84,102,641
4. 21,510,103
5. 802,310

**Q4. Write the table of 16, 17 and 18.**