

HARI VIDYA BHAWAN

Class-VI
Subject-Computer
Lesson 2
Computer Memory
Worksheet-12

Date: 15-05-2021

Instructions:

1. Please note all worksheets of Computer should be completed in computer notebooks.
2. These worksheets will be considered as your periodic test. Marks will be given on completion else you will have to appear for pen paper test once the school reopens.
3. Read every topic which will be given in worksheet of the chapter from your course book.
4. All the students must purchase course books as it will enable you to understand the chapter.
5. All queries regarding worksheets shall be resolved from 08:00 am-3:00 pm .
6. This worksheet will be done in notebook 1.

A)Answer the following steps.

1. What is computer memory?

2. What is secondary memory?

हरि विद्या भवन

कक्षा-6

पाठ2

नादान दोस्त

विषय-हिंदी (उद्भव)

कार्यपत्र 12

दिनांक -15/5/21

सामान्य निर्देश:

1. निम्न प्रश्नों को विषय की नोटबुक में कीजिए।
2. इन्हीं कार्य पत्र के आधार पर आपको सामयिक पेपर्स के नंबर दिए जाएंगे नहीं तो स्कूल खुलने पर पेन पेपर से टेस्ट होगा।
3. सभी बिंदु या प्रश्न आपको आपकी पाठ्य पुस्तक में से दिए गए हैं।
4. सभी छात्रों के लिए आवश्यक है कि वे पुस्तकें खरीदे ताकि हर बात अच्छे से समझ सकें।
5. अगर आपको कार्य पत्र से संबंधित कुछ भी पूछना है तो सुबह 8 से 3 बजे तक पूछ सकते हैं।
6. सभी छात्रों के लिए आवश्यक है कि एक्टिव एप्प डाउनलोड करें ताकि प्रत्येक बिंदु को अच्छे से समझ सकें।

1) दिए गए प्रश्नों के उत्तर दीजिए।

क चिड़िया ने अंडे कहा दिए थे?

उत्तर -----

ख किनको देखने में केशव और श्यामा को दूध और जलेबी की सुध भी न रहती?

उत्तर -----

ग) केशव और श्यामा के मन में क्या क्या सवाल उठते थे?

उत्तर -----

घ) चिड़िया की किस मुसीबत का अंदाजा करके केशव व श्यामा घबरा गए?

उत्तर -----

ड) अंडे गंदे क्यों हुए और उनका क्या हुआ?

उत्तर -----

निर्देश

इन प्रश्नों को अपनों नोटबुक नंबर 1में करे और उद्भव का पेज 17देखें।

HARI VIDYA BHAWAN

Class – VI

Subject : Mathematics

Chapter 3: Playing with Numbers

Worksheet – 12

Date: 15/05/2021

INSTRUCTIONS :

***Please note from now onwards all worksheets should be completed in the notebook of respective subjects.**

These worksheets will be considered as your periodic test. Marks will be given on completion else you will have to appear for a pen-paper test once the school reopens.

***Read every topic which will be given in worksheet of the chapter from your coursebook.**

***All the students must purchase course books as it will enable you to understand the chapter.**

***All queries regarding worksheets shall be resolved from 8:00 am - 3:00 pm**

***Kindly download active app which is must for your effective learning.**

Solve in Maths Rehearse (pearson) -Playing with Numbers - worksheet level - 6

1. Using divisibility tests, determine which of the following numbers are divisible by 4; by 8:

- (a) 572
- (b) 726352
- (c) 5500
- (d) 6000
- (e) 12159
- (f) 14560

2. Using divisibility tests, determine which of following numbers are divisible by 6:

- (a) 297144
- (b) 1258

(c) 4335

(d) 61233

(e) 901352

HARI VIDYA BHAWAN

CLASS – 6th

SOCIAL SCIENCE

WORKSHEET – 12

DATE: 15/05/2021

General Instructions: -

1. Please note from now onwards all worksheets should be completed in notebook of respective subject.
2. These worksheets will be considered as your periodic test. Marks will be given on completion else you will have to appear for pen paper test once the school reopens.
3. Read every topic which will be given in worksheet of the chapter from your course book.
4. All the students must purchase course books as it will enable you to understand the chapter.
5. All queries regarding worksheets shall be resolved from 8:00 a.m. to 3:00p.m.
6. See video 1.3.3 on active app and read chapter 3 of history from social science course book for this worksheet as it will help you to understand the topic.
7. Kindly download active app which is must for your effective learning.
8. You need to do this worksheet in notebook 1.

HISTORY

CHAPTER – 3

From Hunters to Farmers

Que 1. Choose the correct answer:

1. The study of the origins and social relations of human beings is called _____.
(a) Archaeology (b) anthropology (c) scientology (d) none
2. Human began to grow crops during the _____ Age.
(a) Mesolithic (b) Neolithic (c) Palaeolithic (d) Chalcolithic
3. The Old Stone Age is divided into _____ phrases.
(a) Two (b) five (c) four (d) three
4. Early human used fire to _____.
(a) Burn crackers (b) light candles (c) scarce animals (d) none of these
5. The biggest discovery of the Neolithic Age was _____.
(a) Agriculture (b) steam engines (c) horticulture (d) animal husbandry

Que 2. Answer the following questions:

1. What do you understand by the term 'Neolithic Age'?

2. How are we able to gather knowledge about the customs and practices of the Neolithic people?

3. In what way did the beginning of agriculture change the life of early humans?

4. Why did it become essential for people who grew crops to stay in the same place for a longer period of time?

HARI VIDYA BHAWAN

Class-VII
Subject-Computer
Lesson 2
Number System
Worksheet-12

Date: 15-05-2021

Instructions:

1. Please note all worksheets of Computer should be completed in computer notebooks.
2. These worksheets will be considered as your periodic test. Marks will be given on completion else you will have to appear for pen paper test once the school reopens.
3. Read every topic which will be given in worksheet of the chapter from your course book.
4. All the students must purchase course books as it will enable you to understand the chapter.
5. All queries regarding worksheets shall be resolved from 08:00 am-3:00 pm .
6. This worksheet will be done in notebook 1.

A)Answer the following steps.

1. What is number system?

2. Define positional number system.

3. Define bits and bytes.

हरि विद्या भवन

कक्षा- 7

विषय-हिंदी व्याकरण

पाठ 4 शब्द भेद

कार्यपत्र 12

दिनांक 15/05/2021

सामान्य निर्देश:

1. निम्न प्रश्नों को विषय की नोटबुक में कीजिए।
2. इन्हीं कार्य पत्र के आधार पर आपको सामयिक पेपर्स के नंबर दिए जाएंगे नहीं तो स्कूल खुलने पर पेन पेपर से टेस्ट होगा।
3. सभी बिंदु या प्रश्न आपको आपकी पाठ्य पुस्तक में से दिए गए हैं।
4. सभी छात्रों के लिए आवश्यक है कि वे पुस्तकें खरीदे ताकि हर बात अच्छे से समझ सकें।
5. अगर आपको कार्य पत्र से संबंधित कुछ भी पूछना है तो सुबह 8 से 3 बजे तक पूछ सकते हैं।
6. सभी छात्रों के लिए आवश्यक है कि एक्टिव एप्प डाउनलोड करें ताकि प्रत्येक बिंदु को अच्छे से समझ सकें।

प्रश्न 1 शब्द किसे कहते हैं ?

प्रश्न 2 पद किसे कहते हैं ?

प्रश्न 3 उत्पत्ति के आधार पर शब्दों के भेद लिखो ।

प्रश्न 4 रचना के आधार पर शब्दों के भेद लिखो ।

प्रश्न 5 अर्थ के आधार पर शब्दों के भेद लिखो ।

प्रश्न 6 शब्दों के भेद लिखो।

प्रश्न 7 प्रयोग के आधार पर शब्दों के भेद लिखो ।

नोट ;- इन प्रश्नों के लिए वीडियो न 4.4.1 में देखें।

कार्य पत्र को नोटबुक न 1 में करें ।

HARI VIDYA BHAWAN

Class – VII

Subject : Mathematics

Chapter 3: Data Handling

Worksheet – 12

Date: 15/05/2021

INSTRUCTIONS :

*Please note from now onwards all worksheets should be completed in the notebook of respective subjects.

These worksheets will be considered as your periodic test. Marks will be given on completion else you will have to appear for a pen-paper test once the school reopens.

*Read every topic which will be given in worksheet of the chapter from your coursebook.

*All the students must purchase course books as it will enable you to understand the chapter.

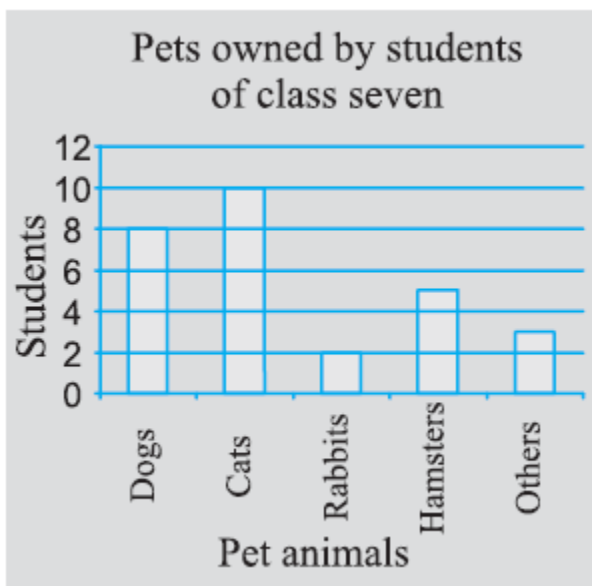
*All queries regarding worksheets shall be resolved from 8:00 am - 3:00 pm

*Kindly download active app which is must for your effective learning.

Solve in Maths Rehearse (pearson) - Data Handling worksheet level -5

1. Use the bar graph to answer the following questions.

(a) Which is the most popular pet? (b) How many students have dog as a pet?



2. Read the bar graph which shows the number of books sold by a bookstore during five consecutive years and answer the following questions:

- (i) About how many books were sold in 1989? 1990? 1992?
- (ii) In which year were about 475 books sold? About 225 books sold?
- (iii) In which years were fewer than 250 books sold?
- (iv) Can you explain how you would estimate the number of books sold in 1989?

3. Number of children in six different classes are given below. Represent the data on a bar graph.

Class	Fifth	Sixth	Seventh	Eighth	Ninth	Tenth
Number of Children	135	120	95	100	90	80

- (a) How would you choose a scale?
- (b) Answer the following questions:
 - (i) Which class has the maximum number of children? And the minimum?
 - (ii) Find the ratio of students of class sixth to the students of class eight.

4. The performance of a student in 1st Term and 2nd Term is given. Draw a double bar graph choosing appropriate scale and answer the following:

Subject	English	Hindi	Maths	Science	S. Science
1st Term (M.M. 100)	67	72	88	81	73
2nd Term (M.M. 100)	70	65	95	85	75

- (i) In which subject, has the child improved his performance the most?
- (ii) In which subject is the improvement the least?
- (iii) Has the performance gone down in any subject?

5. Consider this data collected from a survey of a colony.

Favourite Sport	Cricket	Basket Ball	swimming	Hockey	Athletics
Watching	1240	470	510	430	250
Participating	620	320	320	250	105

- (i) Draw a double bar graph choosing an appropriate scale.

What do you infer from the bar graph?

- (ii) Which sport is most popular?
- (iii) Which is more preferred, watching or participating in sports?

HARI VIDYA BHAWAN

CLASS – 7th

SOCIAL SCIENCE

WORKSHEET 12

DATE: 15/05/2021

General Instructions: -

1. Please note from now onwards all worksheets should be completed in notebook of respective subjects.
2. These worksheets will be considered as your periodic test. Marks will be given on completion else you will have to appear for pen paper test once the school reopens.
3. Read every topic which will be given in worksheet of the chapter from your course book.
4. All the students must purchase course books as it will enable you to understand the chapter.
5. All queries regarding worksheets shall be resolved from 8:00am to 3:00pm.
6. See videos on active app (1.2.3) and read the chapter as it will help you to understand the topic.
7. You need to do this worksheet in notebook 1.

History

CHAPTER – 2

Emergence of New Kingdoms [700-1200CE]

Que A. Choose the correct answer and fill in the blanks.

1. The Tripartite struggle was a battle between the _____ for control over the fertile regions of the Gangetic valley.
a) Palas, Cholas, Rashtrakutas b) Palas, Rashtrakutas, Chahamanas
c) Rashtrakutas, Palas, Gurjara- Pratiharas d) Gurjara-Pratiharas, Palas, Cholas
2. The _____ was an assembly of merchants and belonged to localities where traders and merchants were in a dominant position.
a) Mandalams b) nadus c) valanadus d) nagarams
3. One of the first and most prominent invaders in India in the medieval period was _____.
a) Timur b) Genghis Khan c) Mahmud Ghazni d) Alexander the Great
4. Temple architecture reached its peak under the kingdom of _____.
a) Cholas b) Rashtrakutas c) Pratiharas d) Palas
5. _____ accompanied Mahmud of Ghazni to India during various raids.
a) Ibn Battuta b) Al Biruni c) Al Masudi d) Abul Fazl

Que B. Answer the following questions:

1. Who won the First Battle of Tarain?

2. Name the two greatest rulers of the Chola Empire.

3. Which three empires participated in the Tripartite Struggle?

4. Explain the Tripartite Struggle in your own words.

HARI VIDYA BHAWAN

Class-VIII

Subject-Computer

Lesson 2

Access-Tables and Forms

Worksheet-12

Date: 15-05-2021

Instructions:

1. Please note all worksheets of Computer should be completed in computer notebooks.
2. These worksheets will be considered as your periodic test. Marks will be given on completion else you will have to appear for pen paper test once the school reopens.
3. Read every topic which will be given in worksheet of the chapter from your course book.
4. All the students must purchase course books as it will enable you to understand the chapter.
5. All queries regarding worksheets shall be resolved from 08:00 am-3:00 pm .
6. This worksheet will be done in notebook 1.

A)Answer the following steps.

1. Write down the steps to rename a field?

2. Write down the steps to delete a relationship window?

3. Write down the steps to create a split form?

हरि विद्या भवन

कक्षा- 8

विषय-हिंदी

पाठ 4 मुस्कुराना धर्म है।

कार्यपत्र 12

दिनांक 15/05/2021

सामान्य निर्देश:

1. निम्न प्रश्नों को विषय की नोटबुक में कीजिए।
2. इन्हीं कार्य पत्र के आधार पर आपको सामयिक पेपर्स के नंबर दिए जाएंगे नहीं तो स्कूल खुलने पर पेन पेपर से टेस्ट होगा।
3. सभी बिंदु या प्रश्न आपको आपकी पाठ्य पुस्तक में से दिए गए हैं।
4. सभी छात्रों के लिए आवश्यक है कि वे पुस्तकें खरीदे ताकि हर बात अच्छे से समझ सकें।
5. अगर आपको कार्य पत्र से संबंधित कुछ भी पूछना है तो सुबह 8 से 3 बजे तक पूछ सकते हैं।
6. सभी छात्रों के लिए आवश्यक है कि एक्टिव एप्प डाउनलोड करें ताकि प्रत्येक बिंदु को अच्छे से समझ सकें।

प्रश्न 1 इस कविता के लेखक का नाम बताओ ?

प्रश्न 2 मनुष्य का धर्म कविता के अनुसार क्या है ?

प्रश्न 3 किसे छीन लेना मनुष्य का धर्म है ?

प्रश्न 4 किसे हर विधि उठाना धर्म है ।

प्रश्न 5 किस आँख से आँखें मिलानी चाहिए ?

प्रश्न 6 संसार को किस राह पर चलना चाहिए ?

प्रश्न 7 कवि के अनुसार किस वक्त हँसना धर्म है ?

नोट ;- इन प्रश्नों के लिए हिंदी उद्भव के पाठ 4 मुस्कराना धर्म है में देखें।

कार्य पत्र को नोटबुक न 1 में करें ।

HARI VIDYA BHAWAN

Class – VIII

Subject : Mathematics

Chapter 3: Understanding Quadrilaterals

Worksheet – 12

Date: 15/05/2021

INSTRUCTIONS :

*Please note from now onwards all worksheets should be completed in the notebook of respective subjects.

These worksheets will be considered as your periodic test. Marks will be given on completion else you will have to appear for a pen-paper test once the school reopens.

*Read every topic which will be given in worksheet of the chapter from your coursebook.

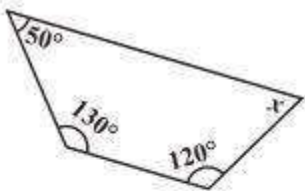
*All the students must purchase course books as it will enable you to understand the chapter.

*All queries regarding worksheets shall be resolved from 8:00 am - 3:00 pm

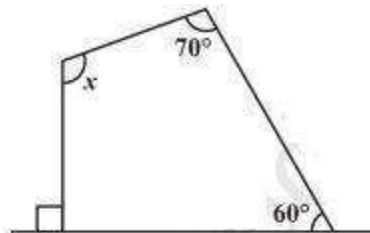
*Kindly download active app which is must for your effective learning.

Solve in Maths Rehearse (pearson) - Understanding Quadrilaterals worksheet level - 2

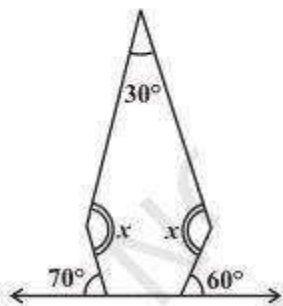
1. Find the angle measure x in the following figures.



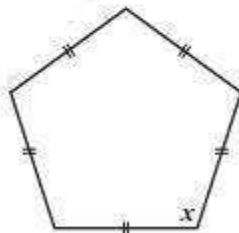
(a)



(b)

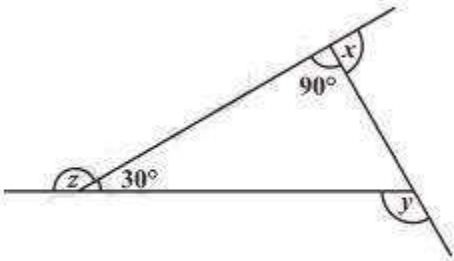


(c)

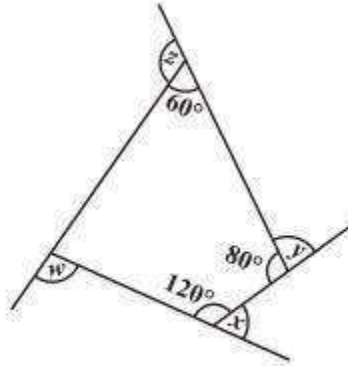


(d)

2.



(a) Find $x + y + z$



(b) Find $x + y + z + w$

HARI VIDYA BHAWAN

CLASS – 8th

SOCIAL SCIENCE

WORKSHEET –12

DATE: 15/05/2021

General Instructions: -

1. Please note from now onwards all worksheets should be completed in notebook of respective subject.
2. These worksheets will be considered as your periodic test. Marks will be given on completion else you will have to appear for pen paper test once the school reopens.
3. Read every topic which will be given in worksheet of the chapter from your course book.
4. All the students must purchase course books as it will enable you to understand the chapter.
5. All queries regarding worksheets shall be resolved from 8:00 a.m. to 3:00p.m.
6. See video 1.2.3 on active app and read chapter 2 of history from social science course book for this worksheet as it will help you to understand the topic.
7. Kindly download active app which is must for your effective learning.
8. You need to do this worksheet in notebook 1.

HISTORY

CHAPTER – 2

Colonial Rule in India

Que 1. State whether True or False:

1. The European trading companies were established to control Indian spice trade. _____
2. Four Anglo-Maratha Wars were fought between the years 1775-1818. _____
3. Lord Dalhousie annexed Award because of misgovernment. _____
4. The Doctrine of lapse was a useful tool in completing the creation of the British Empire in India. _____
5. The Carnatic Wars were fought between the British and Haider Ali. _____

Que 2. Answer the following questions:

1. Why did the British defeat the Nawab of Bengal in the Battle of Plassey?

_____.

2. How long were the Mysore wars stretched?

_____.

3. How did the two Farmans help British fortune in India?
