

Hari Vidya Bhawan

Class VI(Revision Worksheet 10)

ENGLISH

Date :12-02-21

INSTRUCTIONS :

- *Pls note from now onwards all worksheets should be completed in notebook of respective subjects.
- *These worksheets will be considered as your periodic test.Marks will be given on completion else you will have to appear for pen paper test once the school reopens.
- *Read every topic which will be given in worksheet of the chapter from your course book.
- *All the students must purchase course books as it will enable you to understand the chapter.
- *All queries regarding worksheets shall be resolved from 08:00 am - 3:00pm.
- *kindly download Active app for your effective learning
- * Read book lesson-10 or video 10.10.1,10.10.2,10.10.3,10.10.5for this worksheet as it will help you to understand the topic.

A)Answer these questions :

1. Describe Gregor after the transformation.

2. What was Gregor's profession? Describe what he felt about his job.

3. Why did Gregor continue with his job? What was his goal in life?

4. What was Gregor thinking about when his mother called out to him?

5. What did Gregor's voice sound like?

6. Why couldn't Gregor get out of his bed?

B. Answer these questions with reference to the context.

1. 'Why don't I keep sleeping for a little while longer and forget all this foolishness'.

A) Who said these words and to whom?

B) What is the 'foolishness' being referred to here?

C) Is the speaker able to speak sleep longer? Give reason for your answer.

2. 'Something has fallen in there',

A) Who said these words and to whom?

B) What is the 'something' being referred to here?

C) How has the 'something' Fallen?

HARI VIDYA BHAWAN

Revision Worksheet-10

Class – VI

Chapter 9 : DATA HANDLING

Subject : Mathematics

Date: 12/02/2021

INSTRUCTIONS :

***Please note from now onwards all worksheets should be completed in the notebook of respective subjects.**

These worksheets will be considered as your periodic test. Marks will be given on completion else you will have to appear for a pen-paper test once the school reopens.

***Read every topic which will be given in worksheet of the chapter from your coursebook.**

***All the students must purchase course books as it will enable you to understand the chapter.**

***All queries regarding worksheets shall be resolved from 8:00 am - 3:00 pm**













































***Kindly download active app which is must for your effective learning.**

1. Following is the choice of sweets of 30 students of Class VI. Ladoo, Barfi, Ladoo, Jalebi, Ladoo, Rasgulla, Jalebi, Ladoo, Barfi, Rasgulla, Ladoo, Jalebi, Jalebi, Rasgulla, Ladoo, Rasgulla, Jalebi, Ladoo, Rasgulla, Ladoo, Ladoo, Barfi, Rasgulla, Rasgulla, Jalebi, Rasgulla, Ladoo, Rasgulla, Jalebi, Ladoo.

(a) Arrange the names of sweets in a table using tally marks.

(b) Which sweet is preferred by most of the students?

The sale of electric bulbs on different days of a week is shown below :

Days	Number of electric bulbs	 - 2 Bulbs
Monday	     	
Tuesday	       	
Wednesday	   	
Thursday	    	
Friday	      	
Saturday	   	
Sunday	        	

Observe the pictograph and answer the following questions :

- How many bulbs were sold on Friday?
- On which day were the maximum number of bulbs sold?
- On which of the days same number of bulbs were sold?
- On which of the days minimum number of bulbs were sold?
- If one big carton can hold 9 bulbs. How many cartons were needed in the given week?

HARI VIDYA BHAWAN
CLASS – 6th
SOCIAL SCIENCE
REVISION WORKSHEET – 10

DATE: 12/02/2021

General Instructions: -

1. Please note from now onwards all worksheets should be completed in notebook of respective subject.
2. These worksheets will be considered as your periodic test. Marks will be given on completion else you will have to appear for pen paper test once the school reopens.
3. Read every topic which will be given in worksheet of the chapter from your course book.
4. All the students must purchase course books as it will enable you to understand the chapter.
5. All queries regarding worksheets shall be resolved from 8:00 a.m. to 3:00p.m.
6. See video 1.8.3 on active app and read chapter 8 of history from social science course book for this worksheet as it will help you to understand the topic.
7. Kindly download active app which is must for your effective learning.

HISTORY
CHAPTER – 8
The First Empire: The Mauryas

Que 1. Choose the correct answer:

1. Ashoka's dhamma was _____.
(a) A set of ideas of social behaviour (b) a new religion
(c) The dharma every court official has to follow (d) art and craft of Mauryas
2. The Maurya Empire declined because of _____.
(a) The wear successors of Ashoka (b) military weakness
(c) Other empires becoming stronger (d) other empires grouped together
3. Dhamma means dharma in _____.
(a) Pali (b) Prakrit (c) Hindi (d) Bengali
4. Bindusara added _____ India to the empire.
(a) Northwest (b) peninsular (c) central (d) southern

Que 2. Fill in the blanks:

1. Chandragupta Maurya fought with the Greek general _____ in 305 BCE.
2. Megasthenese was an ambassador to the court of _____.
3. Bindusara extended control as far south as _____.
4. _____ deciphered the Brahmi script which gave clues about 'the Beloved of the Gods'.

Que 3. Write True or False:

1. Kautilya was the mentor and guide of Ashoka. _____
2. Megasthenese lived at and wrote an account of Taxila in the book called Indica. _____
3. Ashoka did not conquer any other land except Kalinga. _____
4. Ashoka's policy of dhamma was a religious policy forced upon people. _____

Chapter-10: PRACTICAL GEOMETRY

Subject : Mathematics

Date : 12/2/2021

INSTRUCTIONS :

***Please note from now onwards all worksheets should be completed in the notebook of respective subjects.**

These worksheets will be considered as your periodic test. Marks will be given on completion else you will have to appear for a pen-paper test once the school reopens.

***Read every topic which will be given in worksheet of the chapter from your coursebook.**

***All the students must purchase course books as it will enable you to understand the chapter.**

***All queries regarding worksheets shall be resolved from 8:00 am - 3:00 pm**

***Kindly download active app which is must for your effective learning.**

1. Draw a line, say AB, take a point C outside it. Through C, draw a line parallel to AB using ruler and compasses only.

2. Draw a line l. Draw a perpendicular to l at any point on l. On this perpendicular choose a point X, 4 cm away from l. Through X, draw a line m parallel to l.

3. Let l be a line and P be a point not on l. Through P, draw a line m parallel to l. Now join P to any point Q on l. Choose any other point R on m. Through R, draw a line parallel to PQ. Let this meet l at S. What shape do the two sets of parallel lines enclose?

HARI VIDYA BHAWAN
CLASS - 7th
SOCIAL SCIENCE
REVISION WORKSHEET 10

DATE: 12/02/2021

General Instructions: -

1. Please note from now onwards all worksheets should be completed in notebook of respective subjects.
2. These worksheets will be considered as your periodic test. Marks will be given on completion else you will have to appear for pen paper test once the school reopens.
3. Read every topic which will be given in worksheet of the chapter from your course book.
4. All the students must purchase course books as it will enable you to understand the chapter.
5. All queries regarding worksheets shall be resolved from 8:00am to 3:00pm.
6. See videos on active app (3.7.3) and read the chapter as it will help you to understand the topic.

Geography
CHAPTER - 7

TOPIC - Natural Vegetation and Wildlife

QA. Very short answers:

1. What are the factors that determine the type of vegetation found in a region?

Q B. Short answers:

1. Where are monsoon forests found?

2. Mention the products obtained from the coniferous forests?

Q C. Long answers:

1. How are deciduous forests different from evergreen forests?

HARI VIDYA BHAWAN

Revision Worksheet – 10

Class – VIII

Chapter- 10 : VISUALISING SOLID SHAPES

Subject : Mathematics

Date : 12/02/2021

INSTRUCTIONS :

***Please note from now onwards all worksheets should be completed in the notebook of respective subjects.**

These worksheets will be considered as your periodic test. Marks will be given on completion else you will have to appear for a pen-paper test once the school reopens.

***Read every topic which will be given in worksheet of the chapter from your coursebook.**

***All the students must purchase course books as it will enable you to understand the chapter.**

***All queries regarding worksheets shall be resolved from 8:00 am - 3:00 pm**

***Kindly download active app which is must for your effective learning.**

1. Can a polyhedron have for its faces

(i) 3 triangles?

(ii) 4 triangles?

(iii) a square and four triangles?

2. Is it possible to have a polyhedron with any given number of faces? (Hint: Think of a pyramid).

3. Which are prisms among the following?

(i)



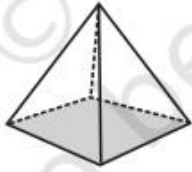
A nail

(ii)



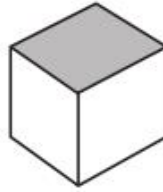
Unsharpened pencil

(iii)



A table weight

(iv)



A box

4. (i) How are prisms and cylinders alike?

(ii) How are pyramids and cones alike?

5. Is a square prism same as a cube? Explain

HARI VIDYA BHAWAN
CLASS – 8th
SOCIAL SCIENCE
REVISION WORKSHEET – 10

DATE: 12/02/2021

General Instructions: -

1. Please note from now onwards all worksheets should be completed in notebook of respective subject.
2. These worksheets will be considered as your periodic test. Marks will be given on completion else you will have to appear for pen paper test once the school reopens.
3. Read every topic which will be given in worksheet of the chapter from your course book.
4. All the students must purchase course books as it will enable you to understand the chapter.
5. All queries regarding worksheets shall be resolved from 8:00 a.m. to 3:00p.m.
6. See video 3.5.5 and 3.5.6 on active app and read chapter 5 of civics from social science course book for this worksheet as it will help you to understand the topic.
7. Kindly download active app which is must for your effective learning.

CIVICS
CHAPTER – 5
Understanding Laws

Que 1. Choose the correct answer:

1. The Minimum Wages Act was passed for the welfare of the _____.
(a) Employers (b) Industrialists (c) Workers (d) Women
2. The Dissent takes place under _____.
(a) Ordinary circumstances (b) extraordinary circumstances
(c) Emergency circumstances (d) no circumstances
3. The Anti-liquor agitation began in the _____.
(a) 1980s (b) 1990s (c) 1930s (d) 1960s
4. Gandhiji started the salt Satyagraha in _____.
(a) 1920 (b) 1940 (c) 1930 (d) 1921
5. The Bhopal Gas Tragedy took place in the year _____.
(a) 1990 (b) 1988 (c) 1986 (d) 1984

Que2. Write true or false:

1. The Minimum Wages Act was passed in 1948. _____
2. The Congress resolved to fight for complete independence at its Lahore session of 1939. _____
3. Bhopal Gas Tragedy occurred due to an accidental blast in the Union Carbide Plant. _____
4. Regularisation of unauthorized colonies has become a controversial law in India. _____
5. The Maternity Benefits Act restricts the employment of pregnant women in hazardous jobs. _____

Que3. Fill in the blanks:

1. The Code on Wages or the Wages Act was passed in _____
2. Dissent means _____
3. The Environment Protection Act was passed after the _____
4. _____ is an example of an unpopular law in pre-independence India.
5. The Maternity Benefits Act 1961 made it mandatory to give _____ weeks of paid holiday to women before and after child birth.