

HARI VIDYA BHAWAN

Subject: English

Class-IX

Work sheet-68

Chapter 4 The Beggar (Moment)

(Revision Practice worksheet)

DATE:- 04/02/2021,

Instructions to be followed:-

- 1. From now onwards students do your worksheets in your particular subject notebook respectively. Don't use rough sheets, old copies or anything else. All the stationary shops have already opened. So you can purchase it.***
- 2. All the students must complete their worksheets as periodic test marks will be given to those who completes it else you will have to go through pen paper test after the school reopens.***
- 3. Read each and every topic (which will be given in worksheets) of the chapters from NCERT books.***
- 4. All the students must purchase NCERT books as it will help you to understand the chapters.***
- 5. If you have any query related to worksheet, ask your queries in whatsapp group between 8:00 am to 03:00pm.***

Learn these questions answers n write in your practice copy...

1. Has Lushkoff become a beggar by circumstance or by choice?

Answer:

Lushkoff became a beggar by circumstance. He used to sing in a Russian choir, but he was sacked due to his drinking habit. This led him to beg.

2. What reasons does he give to Sergei for his telling lies?

Answer:

Lushkoff gave the reason for his telling lies that he formerly sang in a Russian choir but was fired from his job for being an alcoholic. So, he had to tell lies. He could not get along without lying as no one would give him anything if he told the truth.

3. Is Lushkoff a willing worker? Why, then, does he agree to chop wood for Sergei?

Answer:

No, Lushkoff is not a willing worker. He had lost his strength and stamina due to his habit of drinking. He was unhealthy and did not feel the slightest inclination to do any work.

He agrees to chop wood for Sergei not because of his pride and shame and he had been trapped by his own words.

4. Sergei says, “I am happy that my words have taken effect.” Why does he say so? Is he right in saying this?

Answer:

Sergei says this because he could notice a change in Lushkoff who was not willing to work initially. But after he helped Sergei in the packing and hauling of the furniture, Sergei praised him while handing him a rouble. He felt content that his advice had brought Lushkoff on the right path.

No, he was not right in saying so because Lushkoff had not developed the habit of working hard. It was Sergei's cook, Olga who chopped woods for Lushkoff.

5. Lushkoff is earning thirty five roubles a month. How is he obliged to Sergei for this?

Answer:

Lushkoff was obliged to Sergei because if he had not met with Sergei, then he might still have been calling himself a teacher or a student and would have continued begging. By listening to Sergei, he had changed his ways. He was a notary and earned thirty five roubles a month with all credit to Sergei's suggestion and timely help.

6. During their conversation Lushkoff reveals that Sergei's cook, Olga, is responsible for the positive change in him. How has Olga saved Lushkoff?

Answer:

Olga took pity on Lushkoff. She realised his condition and tried her best to improve it. She helped him by chopping wood in his place. Though she called him a ‘miserable creature’, ‘unlucky man’, ‘a drunkard’, and ‘unhappy one’ and said that there was no pleasure for him in this world, she was full of kindness and had a helping attitude. May be she criticised him in order to improve him. The very act of Olga changed and saved him. He says that he had even stopped drinking at the sight of her. It was because of her words and noble deeds that a change took place in his heart. She had set him on the right path.

Hari Vidya Bhawan

Worksheet-68

Class-IX

Subject- Information Technology

Date:-4.2.21

Instructions to be followed:-

- 1:- From now onwards students do your worksheet in your particular subject notebook respectively. Don't use rough sheets, old copies or anything else. All the stationary shop have already opened. So, you can purchase it.
- 2:- All the student must complete their worksheets as Periodic test marks will be given to those who completes it else you will have to go through pen paper test after the school reopens.
- 3:- Read each and every topics (which will be given in worksheets) of the chapters from NCERT books.
4. All the students must purchase NCERT books as it will help you to understand the chapter.
- 5:- If you have any query related to worksheet, ask your queries in WhatsApp group between 8:00 am to 3:00 pm.

Revision worksheet

Do questions and answers

- Q.1 Explain four characteristics of an entrepreneur.
- Q.2 Define four factors that affects in communication.
- Q.3 How you will create a folder? Write the steps.
- Q.4 What are the components of email screen? Write their use in composing an email.
- Q.5 Write the commands for the questions (a) to (c) based on the spreadsheet given below:

	A	B	C	D	E	F	G	H	I	J
1	Roll No.	Name	Annual Charges	Term 1	Term 2	Term 3	Payment Mode	No. of Days	Fine in (₹)	Total Fees
2	1001	Rahul	8600	4500	4300	4400		8		
3	1002	Raju	7600	3400	3500	3500		4		
4	1003	Mukul	5800	3200	3300	3400		2		
5	1004	Jeevan	9000	5400	5500	5300		6		
6	1005	Nidhi	8900	4100	4000	4000		7		
7	1006	Kavita	6000	3200	3500	3000		0		

Note: Fine is ` 20 per day.

- (a) To calculate the Payment Mode as sum of Term 1, Term 2, Term 3 and Annual Charges for each student.
- (b) To calculate the Fine (No. of Days x Fine per day) for each student.
- (c) To calculate the Total Fees (Payment Mode + Fine) for each student.

Note: - First learn all questions/answers then do answer all of these questions yourself in notebook.

PRACTICE WORKSHEET-66**SUBJECT – MATHEMATICS****CLASS – X****CHAPTER – 5 and 6****(Arithmetic Progressions) and (Triangles)****SESSION - (2020-21)****Instructions to be followed: -**

1: -From now onwards students do your worksheets in your particular subject notebook respectively. Don't use rough sheets, old copies or anything else. All the stationary shops have already opened. So, you can purchase it.

2: - All the students must complete their worksheets as Periodic test marks will be given to those who completes it else you will have to go through pen paper test after the school reopens.

3: - Read each and every topic (which will be given in worksheets) of the chapters from NCERT books.

4: - All the students must purchase NCERT books as it will help you to understand the chapter.

5: - If you have any query related to worksheet, ask your queries in WhatsApp group between 8:00 am to 3:00 pm.

1. Find the 20th term of the AP 9, 13, 17, 21,

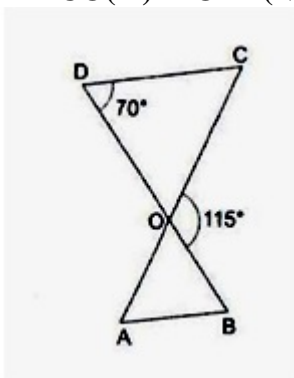
2. Find the 25th term of the AP $5, 4\frac{1}{2}, 4, 3\frac{1}{2}, 3, \dots$

3. Find the nth term of the following AP: 5, 11, 17, 23,

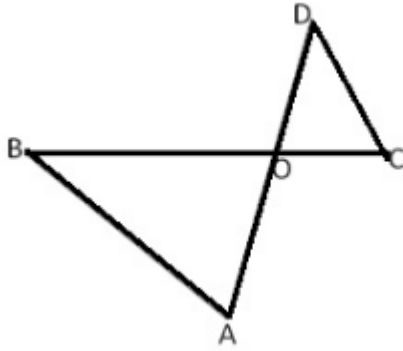
4. If the nth term of a progression is $(4n - 10)$, show that it is an A.P.
Find its (i) first term, (ii) common difference, and (iii) 16th term.

5. In a $\triangle ABC$, M and N are points on the sides AB and AC respectively such that $BM = CN$. If $\angle B = \angle C$ then show $MN \parallel BC$.

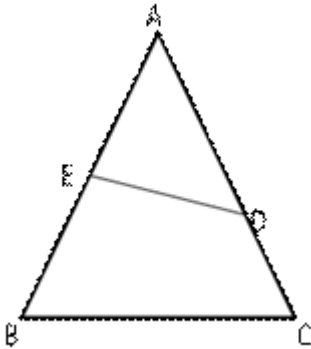
6. In the given figure, $\triangle ODC \sim \triangle OBA$, $\angle BOC = 115^\circ$ and $\angle CDO = 70^\circ$. Find (i) $\angle DOC$ (ii) $\angle DCO$ (iii) $\angle OAB$ (iv) $\angle OBA$



7. In the given figure, $\triangle OAB \sim \triangle OCD$. If $AB = 8$ cm, $BO = 6.4$ cm, $OC = 3.5$ cm and $CD = 5$ cm, find (i) OA (ii) DO



8. In the given figure, if $\angle ADE = \angle B$, show that $\triangle ADE \sim \triangle ABC$. If $AD = 3.8$ cm, $AE = 3.6$ cm, $BE = 2.1$ cm and $BC = 4.2$ cm, find DE .



For Solutions(Q1 to Q4): <https://www.topperlearning.com/r-s-aggarwal-and-v-aggarwal-solutions/cbse-class-10-mathematics/r-s-aggarwal-and-v-aggarwal-mathematics-x/arithmetric-progressions>

For Solutions(Q5 to Q8): <https://www.topperlearning.com/r-s-aggarwal-and-v-aggarwal-solutions/cbse-class-10-mathematics/r-s-aggarwal-and-v-aggarwal-mathematics-x/triangles>

HARI VIDYA BHAWAN
SUBJECT- SOCIAL SCIENCE
CLASS – X
SESSION – 2020 – 21
WORK SHEET - 66

Date-04- 02-2021

General Instructions: -

- From now onwards students do your worksheet in your particular subject notebook respectively. Don't use rough sheets, old copies or anything else. All the stationary shops have already opened. So, you can purchase it.
- All the students must complete their worksheet as periodic test marks will be given to those who completes it else you will have to go through pen paper test after the school reopens.
- Read each and every topic (which will be given in worksheets) of the chapters from NCERT books.
- All the students must purchase NCERT books as it will help you to understand the chapter.
- If you have any query related to worksheet, ask your queries in WhatsApp group between 8:00 am to 3:00 pm.

REVISION WORKSHEET

Very Short Questions

- Q1. In which year was Treaty of Vienna signed?
- Q2. Who was Frederic Sorrien?
- Q3. Give two importance of resources.
- Q4. Mention two ways to solve the problem of land degradation.
- Q5. What is meant by strip cropping?

Q6. Which community in Sri Lanka enjoys majority?

Q7. What is power sharing?

Q8. What is meant by the average income?

Q9. How is BMI (Body Mass Index) calculated?

Q10. What is the other name of primary sector?

Short Questions

Q11. What is meant by the Gross Domestic Product (GDP) of a country?

Q12. Compare the employment conditions prevailing in the organised and unorganised sectors.

Q13. Describe in brief any three features of the Vienna Treaty of 1815.

Q14. Explain any three features of Napoleon code.

Q15. Why is power sharing desirable?